


TERM 2

REVISION WORKSHEET 4

Name: _____ Class: _____

1. A square is divided into 4 equal parts. 3 parts are shaded. What fraction of the square is shaded?




- A. $\frac{1}{2}$ B. $\frac{3}{4}$ C. $\frac{2}{4}$ D. $\frac{1}{4}$

2. Out of 12 balloons, 6 are red, 4 are green, and 2 are yellow. What fraction of the balloons are not red?



- A. $\frac{6}{12}$ B. $\frac{5}{12}$ C. $\frac{4}{12}$ D. $\frac{8}{12}$

3. Ria ate $\frac{1}{4}$ of a chocolate. What fraction of the chocolate is left?



- A. $\frac{1}{2}$ B. $\frac{2}{4}$ C. $\frac{3}{4}$ D. 0

TERM 2 REVISION WORKSHEET 4

Name: _____ Class: _____


4. A pizza is cut into 8 equal slices. Arjun eats 3 slices. What fraction of the pizza is left?

- A. $\frac{3}{8}$ B. $\frac{5}{8}$ C. $\frac{8}{8}$ D. $\frac{1}{3}$

5. Find the fraction that is NOT equal to $\frac{1}{2}$:

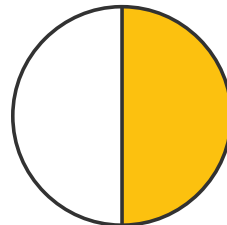
- A. $\frac{2}{4}$ B. $\frac{3}{6}$ C. $\frac{4}{8}$ D. $\frac{3}{8}$

6. There are 10 apples Ria eats $\frac{2}{5}$ of them. How many apples did Ria eat?



- A. 4 B. 2 C. 5 D. 6

7. A circle is divided into 2 equal parts. 1 part is shaded. Which fraction represents the shaded part?



- A. $\frac{1}{1}$ B. $\frac{1}{2}$ C. $\frac{2}{2}$ D. $\frac{1}{3}$

TERM 2

REVISION WORKSHEET 4

Name: _____ Class: _____

8. Out of 16 laddoos, $\frac{1}{4}$ are given to guests. How many laddoos are given to guests?



- A. 2 B. 4 B. 6 D. 8

9. A cake is cut into 6 equal pieces. If 3 friends eat 1 piece each, how many pieces are left?

- A. $\frac{1}{6}$ B. $\frac{3}{6}$ C. $\frac{6}{6}$ D. $\frac{4}{6}$

10. How many quarters make a whole?

- A. 2 B. 4 B. 6 D. 8



MeandMath
BELIEVE YOURSELF

BOOST YOUR MATH PERFORMANCE WITH MeandMath



Our Premium Batches are 1:1, 1:2, 1:3 and 1:6 & another batch is 1: many batches.



Clear Doubts, Master Concepts, Excel with Confidence.



Learn on Your Schedule with Our Class Recordings.



Stay Ahead, Stay Sharp: Conquer Daily Homework Hassle-Free



Level Up Weekly: Ace Assessments with Confidence and Ease

Join Our Live Classes

Register to MnM Olympiad

**Preparing for the
Math Olympiad?**

Book Now >

**Want to test your
International Math
Rank?**

Register Here >

Visit meandmath.com to learn more about us.



A Roadmap to Brilliance

Our curriculum paves the way.

○ **Core** ○ **Advanced** ○ **Scholar**

Visit meandmath.com for further details on Curriculum.

*“There are many
paths to success in
Math. We help all
students discover
theirs.”*

**Are you stuck, not sure how
to solve math problem?**

**Want to Super Charge your
Math skills with our World Class
practice content!**

**Join our Homework
Help Group!**

[Join Now](#)



**Subscribe today to
get a resource to
unlock the World of
Wisdom!**

[Subscribe Here](#)



Visit meandmath.com to learn more about us.