

Name: _____

Grade: _____

Score: _____


Worksheet#3



Even or Odd


Learning objective: Students will count the number of objects and write whether the number is even or odd.

Count the number of each shape and write whether it is even or odd.



How many? _____

Even or Odd? _____




How many? _____

Even or Odd? _____




How many? _____

Even or Odd? _____




How many? _____

Even or Odd? _____



How many? _____

Even or Odd? _____



How many? _____

Even or Odd? _____

Name: _____

Grade: _____


Score: _____

Worksheet#3(Answers)


**Even or Odd**

Learning objective: Students will count the number of objects and write whether the number is even or odd.

Count the number of each shape and write whether it is even or odd.




How many? 7
Even or Odd? Odd




How many? 14
Even or Odd? Even




How many? 15
Even or Odd? Odd



How many? 9
Even or Odd? Odd



How many? 13
Even or Odd? Odd



How many? 11
Even or Odd? Odd