

Name: _____

Grade: _____

Score: _____


Worksheet #1



Finding Area

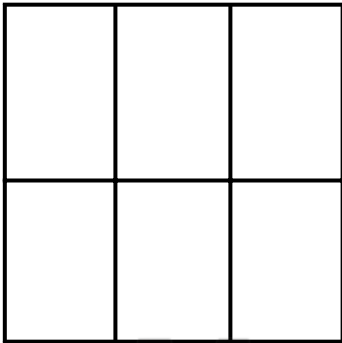
Learning goal: Students will be able to use the grid method to find out the area of squares and rectangles.

1. Find the area of a square that covers 2 rows and 2 columns on the grid.




Answer

2. Find the area of a rectangle that is 3 units long and 2 units wide.



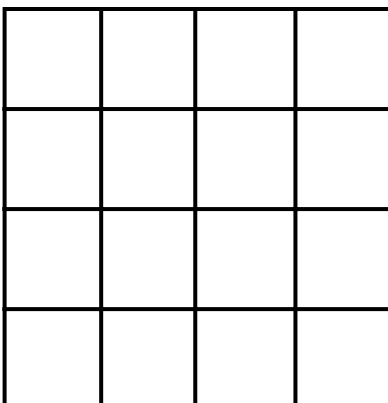
Answer

3. A rectangle is 5 units long and 1 unit wide. What is the area?



Answer

4. Find the area of a square that covers 4 rows and 4 columns.



Answer

Name: _____

Grade: _____

Score: _____


Worksheet #1(Answers)



Finding Area

Learning goal: Students will be able to use the grid method to find out the area of squares and rectangles.

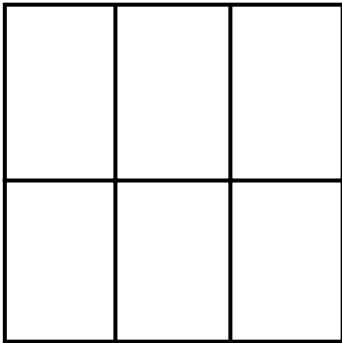
1. Find the area of a square that covers 2 rows and 2 columns on the grid.



Answer

4 sq units

2. Find the area of a rectangle that is 3 units long and 2 units wide.



Answer

6 sq units

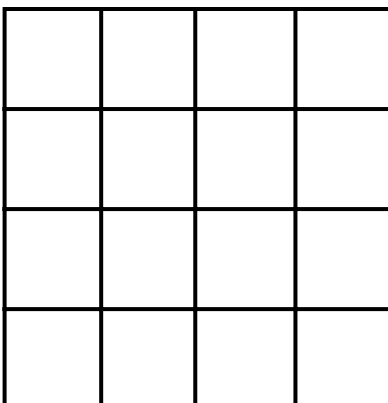
3. A rectangle is 5 units long and 1 unit wide. What is the area?



Answer

5 sq units

4. Find the area of a square that covers 4 rows and 4 columns.



Answer

16 sq units