

Name: \_\_\_\_\_

Grade: \_\_\_\_\_

Score: \_\_\_\_\_


Worksheet #1




**Sides and corners**

**Learning goals: Students will be able to identify the correct number of sides and corners of the given 2D shapes**


Colour the correct number of sides of each shapes.



4 5 6



4 6 8



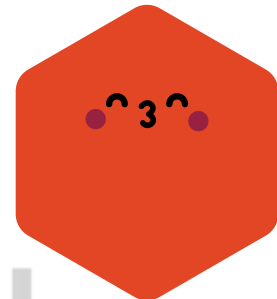
2 3 4




3 4 6




6 7 8




6 7 8



7 8 9



6 7 8



8 10 12

Name: \_\_\_\_\_

Grade: \_\_\_\_\_

Score: \_\_\_\_\_


Worksheet #1(Answers)



**Sides and corners**

**Learning goals: Students will be able to identify the correct number of sides and corners of the given 2D shapes**


Colour the correct number of sides of each shapes.



4

5


6



4

6

8



2

3

4



3

4

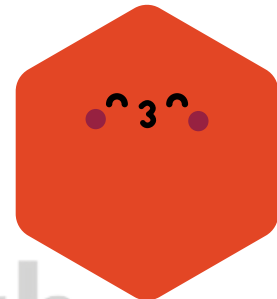
6



6

7


8



6

7


8



7

8


9



6

7

8



8

10

12