

Name: _____





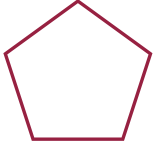

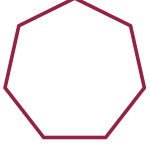

Grade: _____

Score: _____

Worksheet #4

**Sides and corners**

Learning goals: Students will be able to identify the correct number of sides and corners of the given 2D shapes

| Shape | Name | Properties | Real life objects |
|---|------------------|---------------------|-------------------|
|  | Triangle | Sides: Vertices: | |
|  | Square | Sides: Vertices: | |
|  | Rectangle | Sides: Vertices: | |
|  | Circle | Sides: Vertices: | |
|  | Pentagon | Sides: Vertices: | |
|  | Hexagon | Sides: Vertices: | |
|  | Heptagon | Sides: Vertices: | |
|  | Octagon | Sides: Vertices: | |

Name: _____

Grade: _____









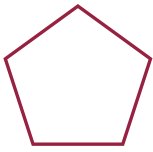



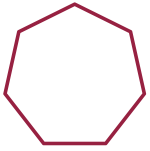
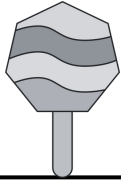


Score: _____

Worksheet #4(Answers)



Sides and corners

Learning goals: Students will be able to identify the correct number of sides and corners of the given 2D shapes

| Shape | Name | Properties | Real life objects |
|---|------------------|-------------------------|---|
|  | Triangle | Sides: 3 Vertices: 3 |  |
|  | Square | Sides: 4 Vertices: 4 |  |
|  | Rectangle | Sides: 4 Vertices: 4 |  |
|  | Circle | Sides: 0 Vertices: 0 |  |
|  | Pentagon | Sides: 5 Vertices: 5 |  |
|  | Hexagon | Sides: 6 Vertices: 6 |  |
|  | Heptagon | Sides: 6 Vertices: 6 |  |
|  | Octagon | Sides: 6 Vertices: 6 |  |