

Name: _____

Grade: _____

Score: _____


Worksheet #3




Sides and corners

Learning goals: Students will be able to identify the correct number of sides and corners of the given 2D shapes


Circle the correct number of corners of each shapes.



4 5 6



4 6 8



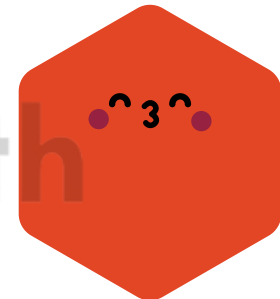
2 3 4




3 4 6




6 7 8




6 7 8



7 8 9



6 7 8



8 10 12

Name: _____

Grade: _____

Score: _____


Worksheet #3(Answers)




Sides and corners

Learning goals: Students will be able to identify the correct number of sides and corners of the given 2D shapes


Colour the correct number of sides of each shapes.



4 5 6



4 6 8



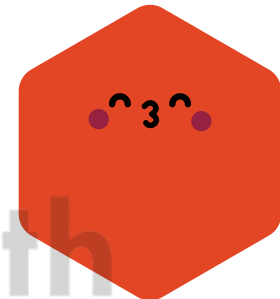
2 3 4




3 4 6




6 7 8




6 7 8



7 8 9



6 7 8



8 10 12