

Name: _____

Grade: _____


Score: _____

Worksheet #2



Sides and corners


Learning goals: Students will be able to identify the correct number of sides and corners of the given 2D shapes



Name - Triangle

Sides - 3

Corners - 3



Name -

Sides -

Corners -



Name -

Sides -

Corners -



Name -

Sides -

Corners -



Name -

Sides -


Corners -



Name -

Sides -


Corners -



Name -

Sides -


Corners -



Name -

Sides -

Corners -



Name -

Sides -

Corners -

Name: _____

Grade: _____


Score: _____

Worksheet #2(Answers)



Sides and corners


Learning goals: Students will be able to identify the correct number of sides and corners of the given 2D shapes



Name - Triangle

Sides - 3

Corners - 3



Name - Circle

Sides - 1

Corners - 0



Name - Square

Sides - 4

Corners - 4



Name - Square

Sides - 4

Corners - 4



Name - Star

Sides - 10


Corners - 10



Name - Trapezium

Sides - 4

Corners - 4



Name - pentagon

Sides - 5


Corners - 5



Name - Heptagon

Sides - 7

Corners - 7



Name - Hexagon

Sides - 6

Corners - 6