

Name: \_\_\_\_\_

Grade: \_\_\_\_\_

Score: \_\_\_\_\_


Worksheet #5



**Naming the shapes**


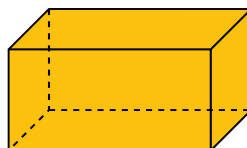


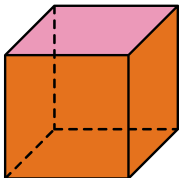
**Learning goals: Students will be able to name the 2D and the 3D shapes correctly by identifying them.**

Write the names of the shapes in the boxes below.



MeandMath

BELIEVE YOURSELF



Name: \_\_\_\_\_

Grade: \_\_\_\_\_

Score: \_\_\_\_\_

Worksheet #5(Answers)



**Naming the shapes**

**Learning goals: Students will be able to name the 2D and the 3D shapes correctly by identifying them.**


Write the names of the shapes in the boxes below.



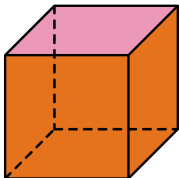
**Square**



**Star**




**Cylinder**




**Cube**



**Rectangle**




**Circle**



**Pentagon**



**Cuboid**



**Cone**