

Name: _____

Grade: _____

Score: _____


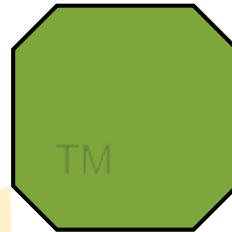


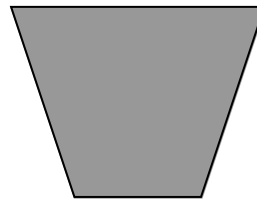

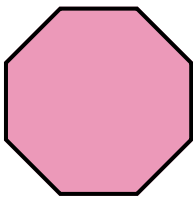
Worksheet #3



Regular and Irregular shapes

Learning goals: Students will be able to identify and differentiate between regular and irregular shapes.

Tick the Regular and cross the irregular shapes.

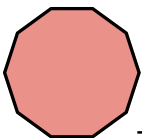


2. Write whether each shape is regular or irregular. Give reasons next to each shape why it is regular or irregular.

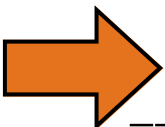
BELIEVE YOURSELF




_____ because _____



_____ because _____



_____ because _____



_____ because _____

Name: _____

Grade: _____

Score: _____



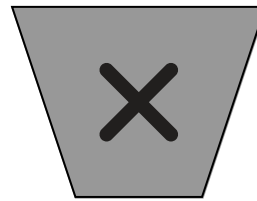


Worksheet #3(Answers)



Regular and Irregular shapes

Learning goals: Students will be able to identify and differentiate between regular and irregular shapes.

Tick the Regular and cross the irregular shapes.

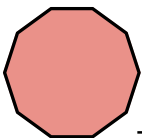


2. Write whether each shape is regular or irregular. Give reasons next to each shape why it is regular or irregular.

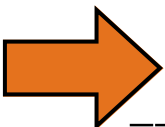
BELIEVE YOURSELF




_____ because _____



_____ because _____



_____ because _____



_____ because _____