

Name: _____

Grade: _____

Score: _____




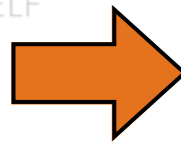

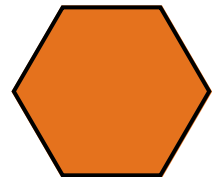

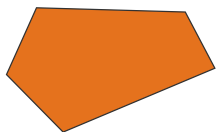

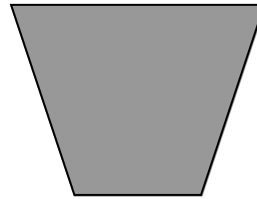

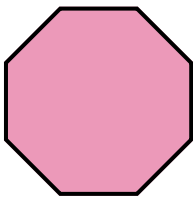
Worksheet #2



Regular and Irregular shapes

Learning goals: Students will be able to identify and differentiate between regular and irregular shapes.

Write R for regular and I for irregular



Name: _____

Grade: _____

Score: _____

Worksheet #2(Answers)



Regular and Irregular shapes

Learning goals: Students will be able to identify and differentiate between regular and irregular shapes.

Write R for regular and I for irregular

