

Name: \_\_\_\_\_

Grade: \_\_\_\_\_

Score: \_\_\_\_\_

## Worksheet #1



### LITRES OR MILLILITRES

**Learning goal:** Students will identify whether an object's capacity is better described in litres or millilitres by looking at the object.

**Instructions:** Tick the correct unit of measurement.




300 mL    300 L



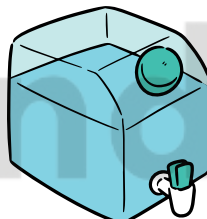
200 mL    200 L




400 mL    400 L



10 mL    10 L



4 mL    4 L



15 mL    15 L



10 mL    10 L



6 mL    6 L



120 mL    120 L

Name: \_\_\_\_\_

Grade: \_\_\_\_\_

Score: \_\_\_\_\_

## Worksheet #1(Answers)



### LITRES OR MILLILITRES

**Learning goal:** Students will identify whether an object's capacity is better described in litres or millilitres by looking at the object.

**Instructions:** Tick the correct unit of measurement.

