

Name: _____

Grade: _____

Score: _____

Worksheet #4



KILOGRAMS OR GRAMS


Learning goal: Students will identify whether an object's weight is better described in kilograms or grams by looking at the object.

Instructions: Tick the correct unit of measurement.



150 g

5 kg



450 g

15 kg



110 g

11 kg



2 g

2 kg



300 g

300 kg




10 g

10 kg




2 g

2 kg



60 g

60 kg



75 g

75 kg

Name: _____

Grade: _____

Score: _____

Worksheet #4(Answers)



KILOGRAMS OR GRAMS

Learning goal: Students will identify whether an object's weight is better described in kilograms or grams by looking at the object.

Instructions: Tick the correct unit of measurement.

