

Name: _____

Grade: _____

Score: _____



Worksheet #5





HEAVIER OR LIGHTER

Learning goal: Students will identify whether an object's height is better described as heavier or lighter by observing the objects.

Instructions: Fill heavier or lighter in the blanks according to the given objects.

A  is than a  knife.

pan

A  is than a  ball.

tub of popcorn

A  is than a  burger.

pumpkin

A  is than a  jug.

bucket

A  is than a  bottle.

glass

Name: _____

Grade: _____

Score: _____

Worksheet #5(Answers)



HEAVIER OR LIGHTER

Learning goal: Students will identify whether an object's height is better described as heavier or lighter by observing the objects.



Instructions: Fill heavier or lighter in the blanks according to the given objects.

A  is **heavier** than a  knife.

A  is **lighter** than a  ball.

A  is **heavier** than a  burger.

A  is **heavier** than a  jug.

A  is **lighter** than a  bottle.