

Name: _____

Grade: _____

Score: _____



Worksheet #2



HEAVIER OR LIGHTER



Learning goal: Students will identify whether an object's height is better described as heavier or lighter by observing the objects.

Instructions: Fill heavier or lighter in the blanks according to the given objects.

A  is than an  orange.
strawberry

A  is than an  apple.
watermelon

A  is than  cherries.
pear

A  is than a  watermelon.
mango

A  is than  few grapes.
banana

Name: _____

Grade: _____

Score: _____



Worksheet #2(Answers)



HEAVIER OR LIGHTER

Learning goal: Students will identify whether an object's height is better described as heavier or lighter by observing the objects.

Instructions: Fill heavier or lighter in the blanks according to the given objects.

A  is **lighter** than an  orange.



strawberry

A  is **heavier** than an  apple.

watermelon

A  is **heavier** than  cherries.

pear

A  is **lighter** than a  watermelon.

mango

A  is **heavier** than  few grapes.

banana