

Name: _____

Grade: _____

Score: _____

Worksheet #4

**Ten-frames Addition**

Learning goal: Students will count the counters in the ten-frames and add to find the sum and write the addition sentence.

●	●	●	●	●
●	●	●	●	●

 +

●	●	●	●	

 $10 + 4 = 14$

●	●	●	●	●
●	●	●	●	●

 +

●	●	●	●	●
●	●	●	●	

●	●	●	●	●
●	●	●	●	●

 +

●	●	●	●	●

●	●	●	●	●
●	●	●	●	●

 +

●	●	●	●	●
●	●	●		

●	●	●	●	●
●	●	●	●	●

 +

●	●	●	●	●
●				

●	●	●	●	●
●	●	●	●	●

 +

●	●	●	●	●
●	●			

Name: _____


Grade: _____

Score: _____

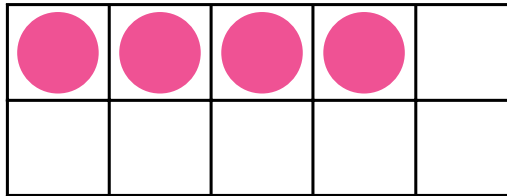
Worksheet #4(Answer)

**Ten-frames Addition**


Learning goal: Students will count the counters in the ten-frames and add to find the sum and write the addition sentence.




+




$10+4 = 14$



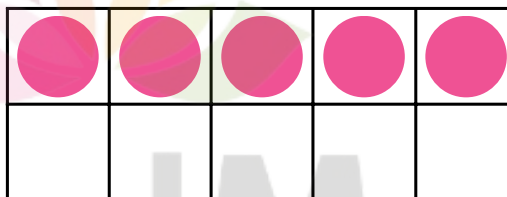
+




$10+9 = 19$



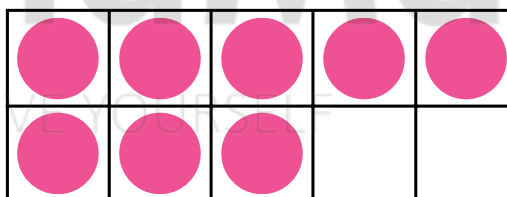
+




$10+5 = 15$



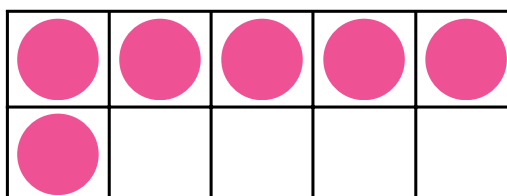
+



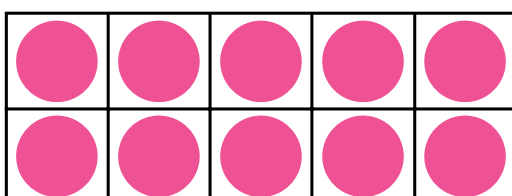
$10+8 = 18$



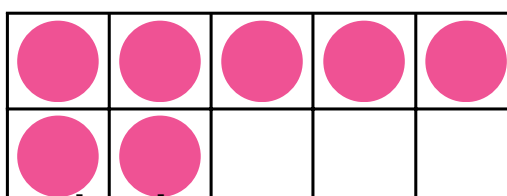
+



$10+6 = 16$



+



$10+7 = 17$