

Name: _____

Grade: _____

Score: _____

Worksheet #3



Ten-frames Addition

Learning goal: Students will use ten-frames to understand number bonds under 20, practice addition, and write corresponding equations to strengthen number sense.

●	●	●	●	●
●	●	●	●	●

 +

●	●	●	●	●
●	●	●	●	

 $10 + 9 = 19$

●	●	●	●	●
●	●	●	●	●

 +

●	●	●	●	●
●				

●	●	●	●	●
●	●	●	●	●

 +

●	●			

●	●	●	●	●
●	●	●	●	●

 +

●	●	●	●	

●	●	●	●	●
●	●	●	●	●

 +

●	●	●		

●	●	●	●	●
●	●	●	●	●

 +

●	●	●	●	●
●	●	●		

Name: _____


Grade: _____

Score: _____


Worksheet #3(Answer)

**Ten-frames Addition**


Learning goal: Students will count the counters in the ten-frames and add to find the sum and write the addition sentence.



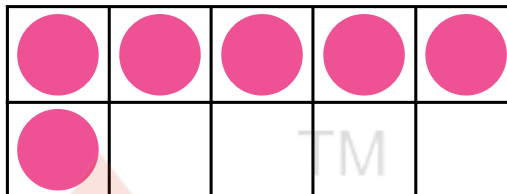
+




$$10 + 9 = 19$$



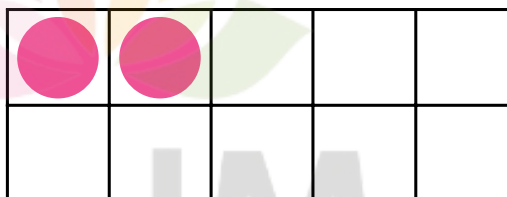
+




$$10 + 6 = 16$$



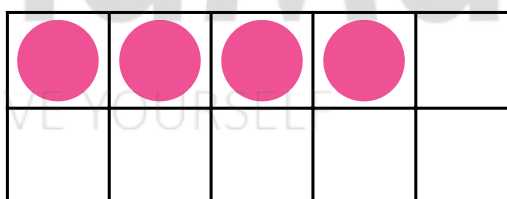
+



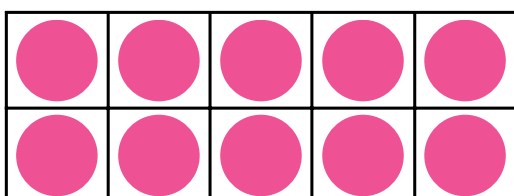
$$10 + 2 = 12$$



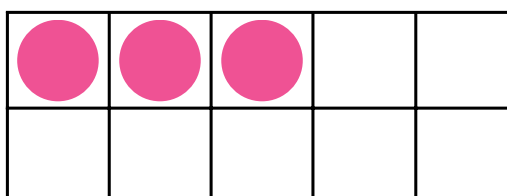
+



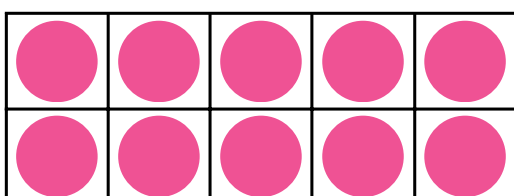
$$10 + 4 = 14$$



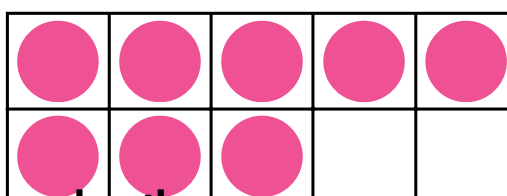
+



$$10 + 3 = 13$$



+



$$10 + 8 = 18$$