

Name: \_\_\_\_\_

Grade: \_\_\_\_\_

Score: \_\_\_\_\_

## Worksheet #2



# Ten-frames Addition

**Learning goal:** Students will use ten-frames to understand number bonds under 20, practice addition, and write corresponding equations to strengthen number sense.

●	●	●	●	●
●	●	●	●	●

 + 

●	●	●		

 **$10 + 3 = 13$** 

●	●	●	●	●
●	●	●	●	●

 + 

●	●	●	●	●
●	●			

●	●	●	●	●
●	●	●	●	●

 + 

●	●	●	●	●
●	●	●	●	

●	●	●	●	●
●	●	●	●	●

 + 

●	●	●	●	●
●	●	●		

●	●	●	●	●
●	●	●	●	●

 + 

●	●	●	●	

●	●	●	●	●
●	●	●	●	●

 + 


Name: \_\_\_\_\_


Grade: \_\_\_\_\_

Score: \_\_\_\_\_

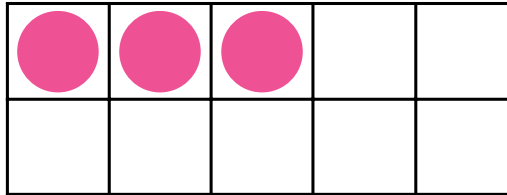
## Worksheet #2(Answer)

**Ten-frames Addition**


**Learning goal:** Students will use ten-frames to understand number bonds under 20, practice addition, and write corresponding equations to strengthen number sense.



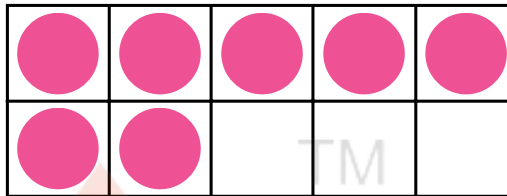
+




$10+3 = 13$




+




$10+7 = 17$



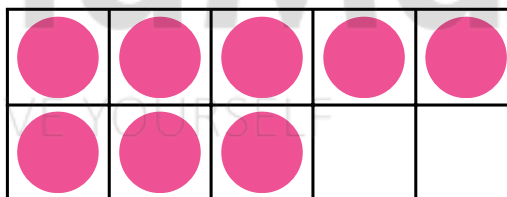
+




$10+9 = 19$



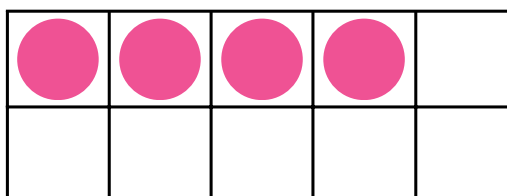
+




$10+8 = 18$



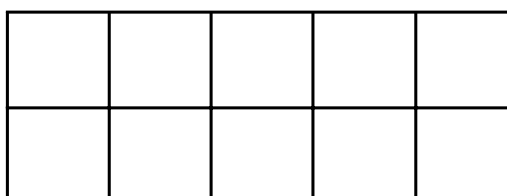
+



$10+4 = 14$



+



$10+0 = 10$