

Name: _____

Grade: _____

Score: _____

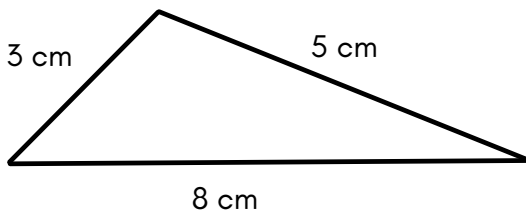
Worksheet #4



Perimeter

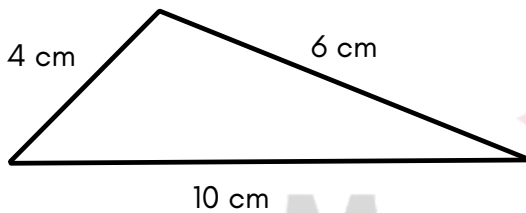
Learning goal: Students will be able to calculate the perimeter of basic shapes using formulas and addition strategies.

1. Find the perimeter of the Triangle.



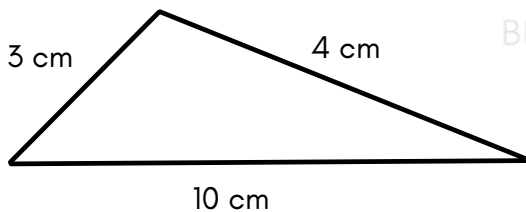
Answer

2. Find the perimeter of the Triangle.



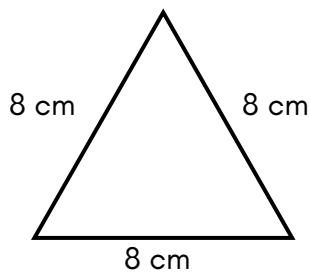
Answer

3. Find the perimeter of the Triangle.



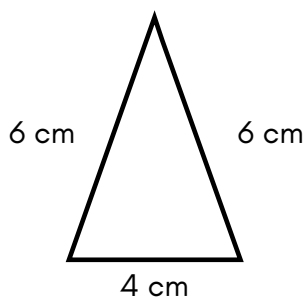
Answer

4. Find the perimeter of the Triangle



Answer

5. Find the perimeter of the Triangle.



Answer

Name: _____

Grade: _____

Score: _____

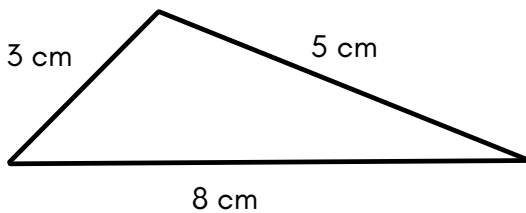
Worksheet #4(Answers)



Perimeter

Learning goal: Students will be able to calculate the perimeter of basic shapes using formulas and addition strategies.

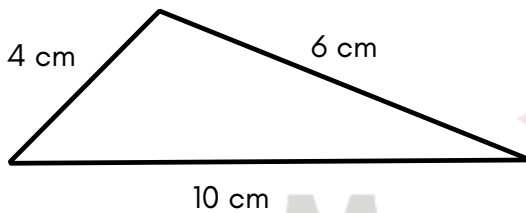
1. Find the perimeter of the Triangle.



Answer

16 cm

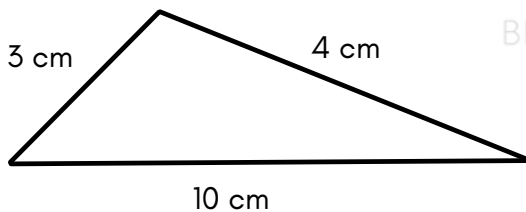
2. Find the perimeter of the Triangle.



Answer

20 cm

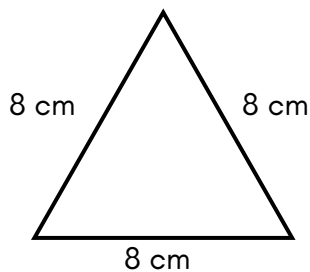
3. Find the perimeter of the Triangle.



Answer

17 cm

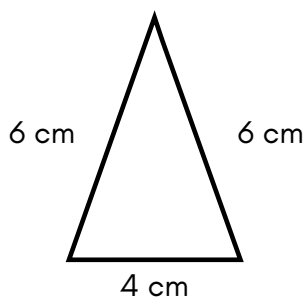
4. Find the perimeter of the Triangle



Answer

24 cm

5. Find the perimeter of the Triangle.



Answer

16 cm