

Name: _____

Grade: _____

Score: _____

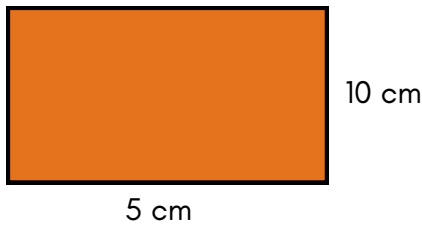
Worksheet #3



Perimeter


Learning goal: Students will be able to calculate the perimeter of basic shapes using formulas and addition strategies.

1. Find the perimeter of the Rectangle



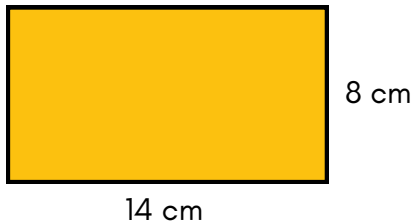
Answer

2. Find the perimeter of the Rectangle



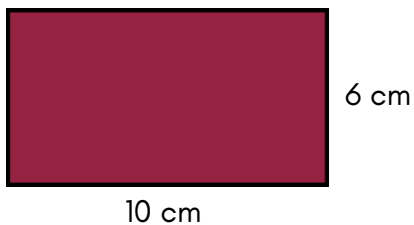
Answer

3. Find the perimeter of the Rectangle



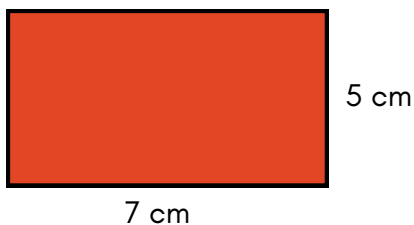
Answer

4. Find the perimeter of the Rectangle



Answer

5. Find the perimeter of the Rectangle



Answer

Name: _____

Grade: _____

Score: _____

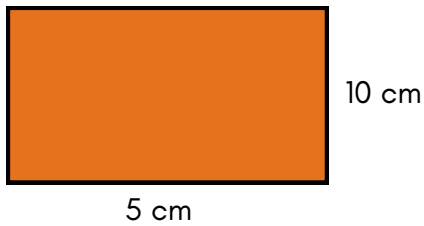
Worksheet #3(Answers)



Perimeter

Learning goal: Students will be able to calculate the perimeter of basic shapes using formulas and addition strategies.


1. Find the perimeter of the Rectangle



Answer

30 cm

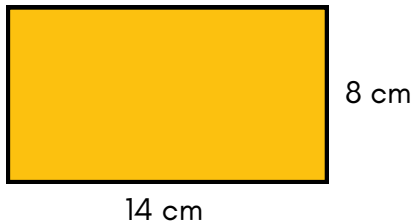
2. Find the perimeter of the Rectangle



Answer

28 cm

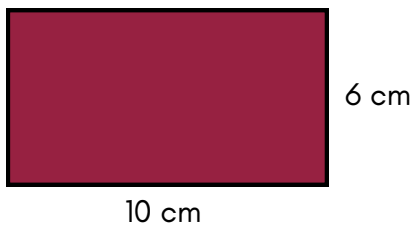
3. Find the perimeter of the Rectangle



Answer

44 cm

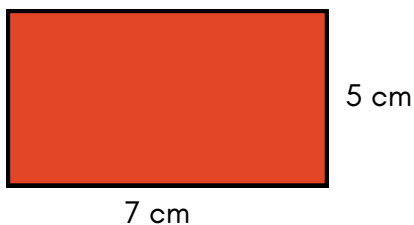
4. Find the perimeter of the Rectangle



Answer

32 cm

5. Find the perimeter of the Rectangle



Answer

24 cm