

Name: _____

Grade: _____

Score: _____

Worksheet #3



Area

Learning goal: Students will be able to use formulas to calculate the area of squares and rectangles.

1. Find the area of the Rectangle



3 cm

8 cm

Answer

2. Find the area of the Rectangle



4 cm

13 cm

Answer

3. Find the area of the Rectangle



7 cm

12 cm

Answer

4. Find the area of the Rectangle



8 cm

14 cm

Answer

5. Find the area of the Rectangle



5 cm

6 cm

Answer

Name: _____

Grade: _____

Score: _____

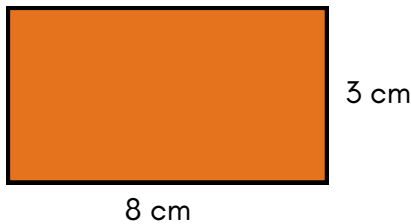
Worksheet #3(Answers)



Area

Learning goal: Students will be able to use formulas to calculate the area of squares and rectangles.

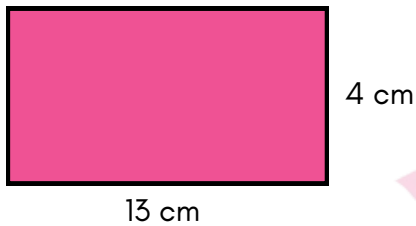
1. Find the area of the Rectangle



Answer

24 sq cm

2. Find the area of the Rectangle



Answer

52 sq cm

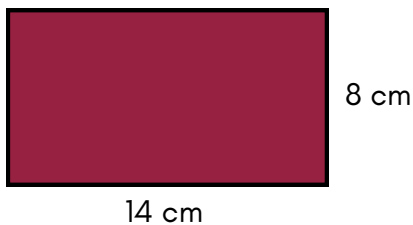
3. Find the area of the Rectangle



Answer

84 sq cm


4. Find the area of the Rectangle



Answer

112 sq cm

5. Find the area of the Rectangle



Answer

30 sq cm