

Name: _____

Grade: _____

Score: _____


Worksheet #5



Area - Word problems


Learning goal: Students will be able to use the formula to calculate area and solve the word problems.

1. A square mirror has a side of 7 feet. Find its area.




Answer

2. A rectangular poster is 40 cm long and 25 cm wide. Find the area.



Answer

3. A square-shaped napkin has a side of 9 inches. Find its area.



Answer

4. A rectangular parking lot is 200 meters long and 100 meters wide. Find the area.



Answer

Name: _____

Grade: _____

Score: _____


Worksheet #5(Answers)



Area - Word problems

Learning goal: Students will be able to use the formula to calculate area and solve the word problems.


1. A square mirror has a side of 7 feet. Find its area.



Answer

49 sq feet


2. A rectangular poster is 40 cm long and 25 cm wide. Find the area.



Answer

1000 sq cm

3. A square-shaped napkin has a side of 9 inches. Find its area.



Answer

81 sq inches

4. A rectangular parking lot is 200 meters long and 100 meters wide. Find the area.



Answer

9 sq meters