

Name: _____

Grade: _____

Score: _____

Worksheet #4



Area - Word problems


Learning goal: Students will be able to use the formula to calculate area and solve the word problems.

1. A rectangular-shaped playground has sides measuring 50 meters and 40 meters each. What is its area?



Answer

2. A square-tile has each side measuring 5 cm. Find the area?



Answer

3. A rectangular room has each sides of 12 cm and 8 cm. What is its area?



Answer

4. A rectangular board has sides each of 8 m and 5 cm. Find its area.



Answer

Name: _____

Grade: _____

Score: _____


Worksheet #4(Answers)



Area - Word problems

Learning goal: Students will be able to use the formula to calculate area and solve the word problems.


1. A rectangular-shaped playground has sides measuring 50 meters and 40 meters each. What is its area?



Answer

2000 sq meters

2. A square-tile has each side measuring 5 cm. Find the area?



Answer

25 sq cm

3. A rectangular room has each sides of 12 cm and 8 cm. What is its area?



Answer

96 sq meters

4. A rectangular board has sides each of 8 m and 5 cm. Find its area.



Answer

40 sq meters