

Name: \_\_\_\_\_

Grade: \_\_\_\_\_

Score: \_\_\_\_\_

## Worksheet #2



### Area - Word problems

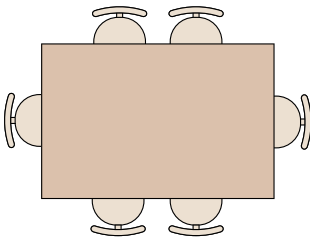
**Learning goal:** Students will be able to use the formula to calculate area and solve the word problems.

1. A rectangular garden is 8 meters long and 5 meters wide. What is its area?



Answer

2. A rectangular table is 2 meters long and 5 meters wide. Find the area of the tabletop




Answer

3. A Classroom blackboard is 6 feet long and 4 feet wide. Find its area



Answer

4. A photo frame is 10 inches long and 8 inches wide. What is the area inside the frame?



Answer

Name: \_\_\_\_\_

Grade: \_\_\_\_\_

Score: \_\_\_\_\_

## Worksheet #2(Answers)



### Area - Word problems

**Learning goal:** Students will be able to use the formula to calculate area and solve the word problems.

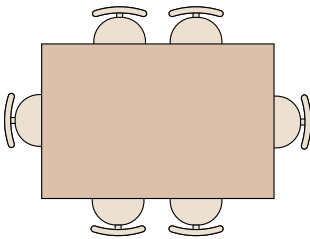
1. A rectangular garden is 8 meters long and 5 meters wide. What is its area?



Answer

**40 sq meters**

2. A rectangular table is 2 meters long and 5 meters wide. Find the area of the tabletop



Answer

**10 sq meters**


3. A Classroom blackboard is 6 feet long and 4 feet wide. Find its area



Answer

**24 sq meters**

4. A photo frame is 10 inches long and 8 inches wide. What is the area inside the frame?



Answer

**80 sq meters**