

Name: _____

Grade: _____













Score: _____

Worksheet #4

**2D Shapes****Learning goals: Students will be able to identify the 2D shapes**

Identify the 2D shapes and tick the correct names.

CIRCLE	TRIAPEZIUM	SQUARE	PENTAGON
OVAL	RECTANGLE	TRIANGLE	HEPTAGON
STAR	SEMICIRCLE	OCTAGON	HEXAGON

 <input type="text"/>	 <input type="text"/>	 <input type="text"/>
 <input type="text"/>	 <input type="text"/>	 <input type="text"/>
 <input type="text"/>	 <input type="text"/>	 <input type="text"/>
 <input type="text"/>	 <input type="text"/>	 <input type="text"/>

Name: _____

Grade: _____













Score: _____

Worksheet #4(Answers)

**2D Shapes****Learning goals: Students will be able to identify the 2D shapes**

Identify the 2D shapes and tick the correct names.

CIRCLE	TRIAPEZIUM	SQUARE	PENTAGON
OVAL	RECTANGLE	TRIANGLE	HEPTAGON
STAR	SEMICIRCLE	OCTAGON	HEXAGON

 SQUARE	 RECTANGLE	 CIRCLE
 TRIANGLE	 TRIAPEZIUM	 OCTAGON
 PENTAGON	 HEXAGON	 HEPTAGON
 OVAL	 SEMICIRCLE	 STAR