

Name: _____











Grade: _____

Score: _____

Worksheet #3

**2D Shapes****Learning goals: Students will be able to identify the 2D shapes**

Identify the 2D shapes and tick the correct names.

	<div>Rectangle</div> <div>Square</div>		<div>Rectangle</div> <div>Square</div>
	<div>Oval</div> <div>Circle</div>		<div>Diamond</div> <div>Trapezium</div>
	<div>Triangle</div> <div>Trapezium</div>		<div>Semicircle</div> <div>Oval</div>
	<div>Pentagon</div> <div>Hexagon</div>		<div>Heptagon</div> <div>Pentagon</div>
	<div>Pentagon</div> <div>Hexagon</div>		<div>Hexagon</div> <div>Octagon</div>

Name: _____











Grade: _____

Score: _____

Worksheet #3(Answers)

**2D Shapes****Learning goals: Students will be able to identify the 2D shapes**

Identify the 2D shapes and tick the correct names.

	<div>Rectangle</div> <div>Square ✓</div>		<div>Rectangle ✓</div> <div>Square</div>
	<div>Oval</div> <div>Circle ✓</div>		<div>Diamond</div> <div>Trapezium ✓</div>
	<div>Triangle ✓</div> <div>Trapezium</div>		<div>Semicircle</div> <div>Oval ✓</div>
	<div>Pentagon</div> <div>Hexagon ✓</div>		<div>Heptagon ✓</div> <div>Pentagon</div>
	<div>Pentagon ✓</div> <div>Hexagon</div>		<div>Hexagon</div> <div>Octagon ✓</div>