

Name: _____











Grade: _____

Score: _____

Worksheet #2

**2D Shapes****Learning goals: Students will be able to identify the 2D shapes**

Identify the 2D shapes and tick the correct names.

| | | | |
|---|--|--|---|
|  | <div>RECTANGLE</div> <div>TRIANGLE</div> |  | <div>SQUARE</div> <div>RECTANGLE</div> |
|  | <div>SQUARE</div> <div>RECTANGLE</div> |  | <div>PENTAGON</div> <div>HEPTAGON</div> |
|  | <div>HEXAGON</div> <div>HEPTAGON</div> |  | <div>OCTAGON</div> <div>HEPTAGON</div> |
|  | <div>OCTAGON</div> <div>TRAPEZIUM</div> |  | <div>CIRCLE</div> <div>OVAL</div> |
|  | <div>SEMICIRCLE</div> <div>OVAL</div> |  | <div>SEMICIRCLE</div> <div>OVAL</div> |

Name: _____











Grade: _____

Score: _____

Worksheet #2(Answers)

**2D Shapes****Learning goals: Students will be able to identify the 2D shapes**

Identify the 2D shapes and tick the correct names.

| | | | |
|---|--|--|---|
|  | <div>RECTANGLE</div> <div>TRIANGLE ✓</div> |  | <div>SQUARE ✓</div> <div>RECTANGLE</div> |
|  | <div>SQUARE</div> <div>RECTANGLE ✓</div> |  | <div>PENTAGON ✓</div> <div>HEPTAGON</div> |
|  | <div>HEXAGON</div> <div>HEPTAGON ✓</div> |  | <div>OCTAGON</div> <div>HEPTAGON ✓</div> |
|  | <div>OCTAGON ✓</div> <div>TRAPEZIUM</div> |  | <div>CIRCLE ✓</div> <div>OVAL</div> |
|  | <div>SEMICIRCLE</div> <div>OVAL ✓</div> |  | <div>SEMICIRCLE ✓</div> <div>OVAL</div> |