

# Rational numbers on a Number line

## Worksheet #4

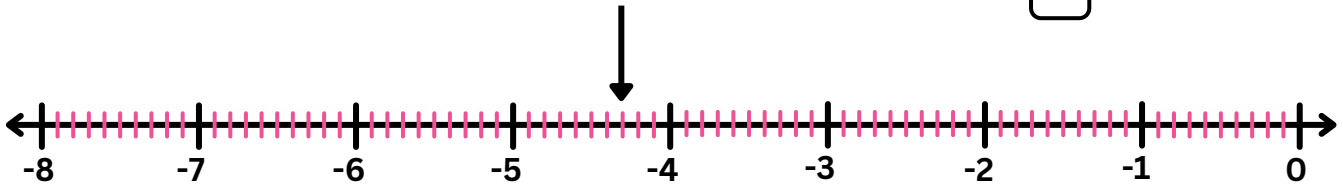
Name: \_\_\_\_\_

Class: \_\_\_\_\_

**Instruction:** Write the rational number plotted by the arrow.

### Plotting Rational numbers on a number line

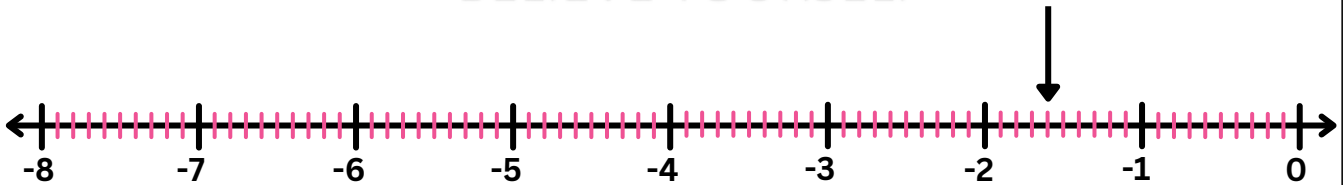
A. What is the rational number represented by an arrow?



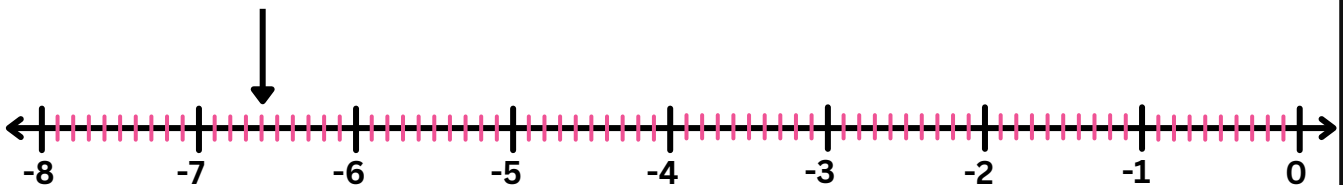
B. What is the rational number represented by an arrow?



C. What is the rational number represented by an arrow?



D. What is the rational number represented by an arrow?



# Rational numbers on a Number line

## Worksheet #4(Answers)

Name: \_\_\_\_\_

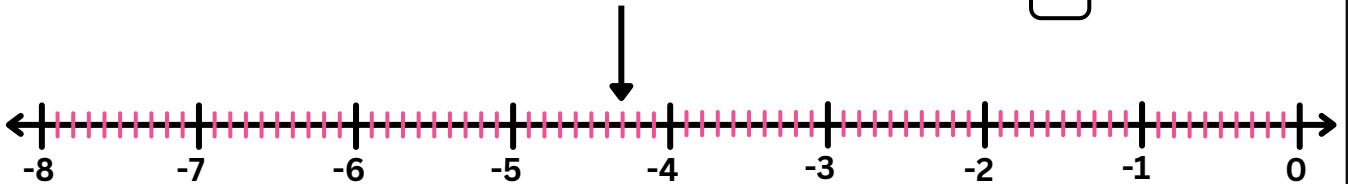
Class: \_\_\_\_\_

**Instruction:** Write the rational number plotted by the arrow.

### Plotting Rational numbers on a number line

A. What is the rational number represented by an arrow?

$$\frac{-43}{10}$$



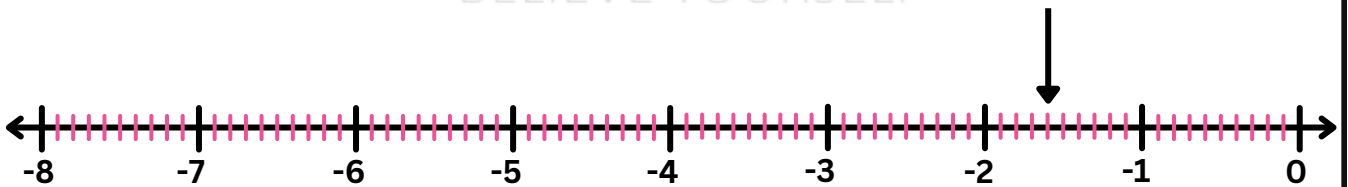
B. What is the rational number represented by an arrow?

$$\frac{-77}{10}$$



C. What is the rational number represented by an arrow?

$$\frac{-16}{10}$$



D. What is the rational number represented by an arrow?

$$\frac{-66}{10}$$

