

Rational numbers on a Number line

Worksheet #2

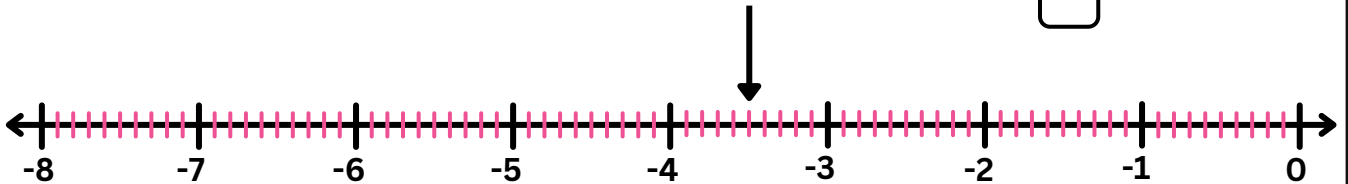
Name: _____

Class: _____


Instruction: Write the rational number plotted by the arrow.

Plotting Rational numbers on a number line

A. What is the rational number represented by an arrow?



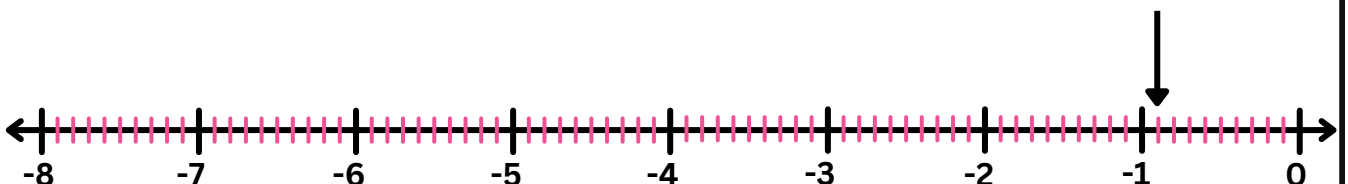
B. What is the rational number represented by an arrow?



C. What is the rational number represented by an arrow?



D. What is the rational number represented by an arrow?



Rational numbers on a Number line

Worksheet #2 (Answers)

Name: _____

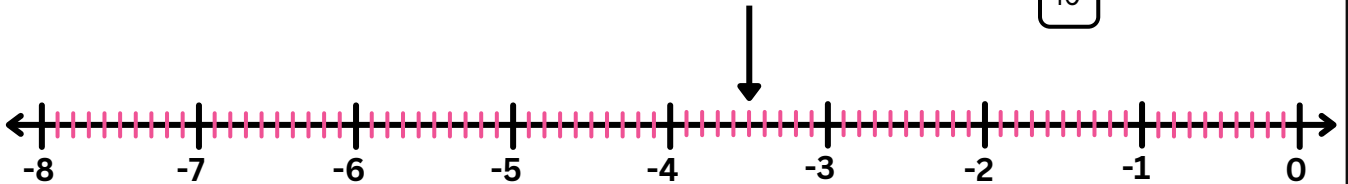
Class: _____

Instruction: Write the rational number plotted by the arrow.

Plotting Rational numbers on a number line


A. What is the rational number represented by an arrow?

$$\frac{-35}{10}$$



B. What is the rational number represented by an arrow?

$$\frac{-44}{10}$$



C. What is the rational number represented by an arrow?

$$\frac{-57}{10}$$



D. What is the rational number represented by an arrow?

$$\frac{-9}{10}$$

