

# Rational numbers on a Number line

## Worksheet #1

Name: \_\_\_\_\_

Class: \_\_\_\_\_

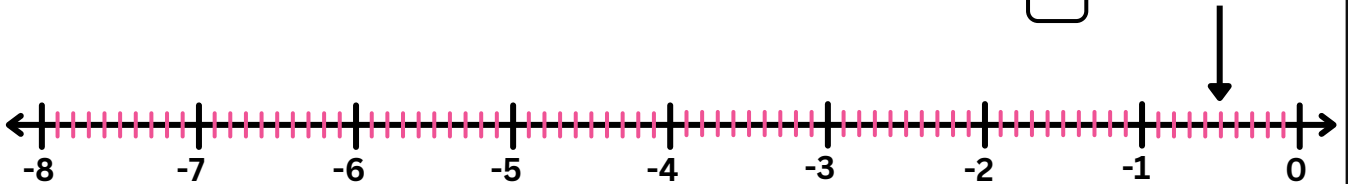
**Instruction:** Write the rational number plotted by the arrow.

### Plotting Rational numbers on a number line


A. What is the rational number represented by an arrow?

-5

10



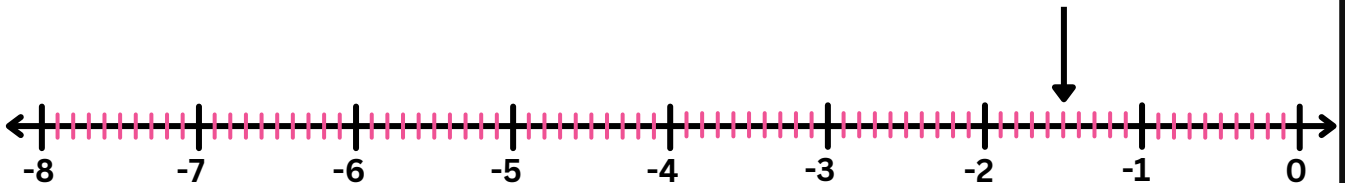
B. What is the rational number represented by an arrow?



C. What is the rational number represented by an arrow?



D. What is the rational number represented by an arrow?



# Rational numbers on a Number line

## Worksheet #1(Answers)

Name: \_\_\_\_\_

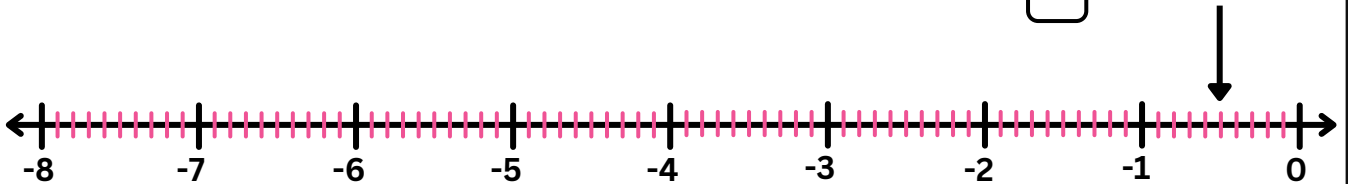
Class: \_\_\_\_\_

**Instruction:** Write the rational number plotted by the arrow.

### Plotting Rational numbers on a number line


A. What is the rational number represented by an arrow?

$$\frac{-5}{10}$$



B. What is the rational number represented by an arrow?

$$\frac{-37}{10}$$



C. What is the rational number represented by an arrow?

$$\frac{-61}{10}$$



D. What is the rational number represented by an arrow?

$$\frac{-15}{10}$$

