

Name: _____

Grade: _____

Score: _____

Worksheet #2

**Picture Subtraction**

Learning goal: Students will count the objects and write the subtraction sentence representing the pictures.


 $= 11 - 6$


 $= \square - \square$

 $= \square - \square$

 $= \square - \square$

 $= \square - \square$

 $= \square - \square$

 $= \square - \square$

Name: _____

Grade: _____

Score: _____

Worksheet #2(Answers)

**Picture Subtraction**

Learning goal: Students will count the objects and write the subtraction sentence representing the pictures.



$$= 11 - 6$$



$$= 11 - 7$$


$$= 11 - 9$$


$$= 11 - 8$$


$$= 11 - 5$$


$$= 22 - 16$$


$$= 22 - 15$$