

Name: _____

Grade: _____


Score: _____

Worksheet #1



Picture Subtraction

Learning goal: Students will count the objects and write the subtraction sentence representing the pictures.


 $= 10 - 3$


 $= \square - \square$

 $= \square - \square$

 $= \square - \square$

 $= \square - \square$

 $= \square - \square$

 $= \square - \square$

Name: _____


Grade: _____

Score: _____

Worksheet #1(Answers)

**Picture Subtraction**

Learning goal: Students will count the objects and write the subtraction sentence representing the pictures.


 $= 10 - 3$


 $= 10 - 5$

 $= 10 - 7$

 $= 10 - 8$

 $= 10 - 6$

 $= 20 - 11$

 $= 20 - 15$