

Name: \_\_\_\_\_

Grade: \_\_\_\_\_




Score: \_\_\_\_\_




## Worksheet #4















# Repeated Addition

**Learning goal: Students will add the same number of objects repeatedly and write the multiplication sentence.**

 $+$  $+$  $= \boxed{3} \times \boxed{6}$

 $+$  $+$  $= \boxed{\phantom{0}} \times \boxed{\phantom{0}}$

 $+$  $+$  $+$  $+$  $+$  $+$  $= \boxed{\phantom{0}} \times \boxed{\phantom{0}}$

 $+$  $+$  $+$  $+$  $= \boxed{\phantom{0}} \times \boxed{\phantom{0}}$

 $= \boxed{\phantom{0}} \times \boxed{\phantom{0}}$

Name: \_\_\_\_\_


Grade: \_\_\_\_\_


Score: \_\_\_\_\_


## Worksheet #4(Answers)

**Repeated Addition**


**Learning goal: Students will add the same number of objects repeatedly and write the multiplication sentence.**


$$= \boxed{3} \times \boxed{6}$$


$$= \boxed{3} \times \boxed{5}$$


$$= \boxed{2} \times \boxed{7}$$


$$= \boxed{3} \times \boxed{5}$$


$$= \boxed{4} \times \boxed{2}$$