

Name: _____

Grade: _____

Score: _____

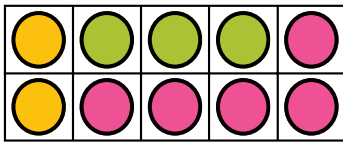
Worksheet #4



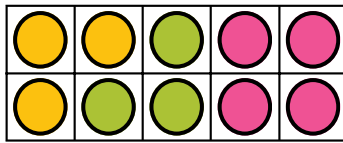
Understanding Ratio

Learning goal: Students will understand ratio with visuals and can represent the concept visually.

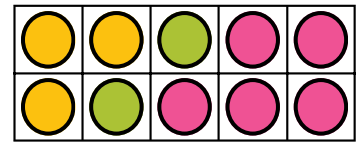
Instructions: Write the ratio for the given colored counters.



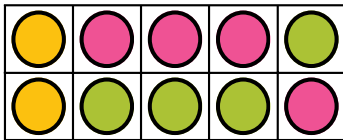
$$\text{Pink} : \text{Green} = 5:3$$



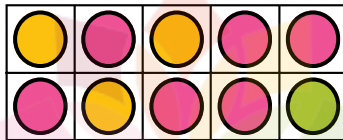
$$\text{Pink} : \text{Green} =$$



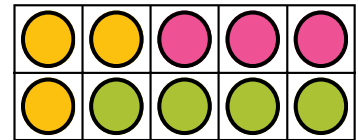
$$\text{Pink} : \text{Green} =$$



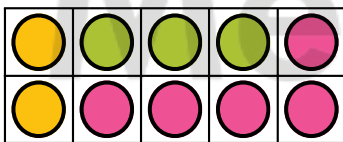
$$\text{Pink} : \text{Green} =$$




$$\text{Yellow} : \text{Green} =$$



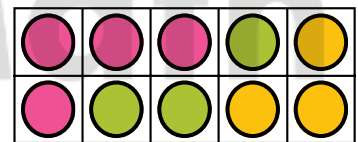
$$\text{Green} : \text{Pink} =$$



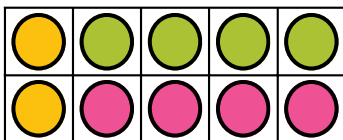
$$\text{Green} : \text{Pink} =$$



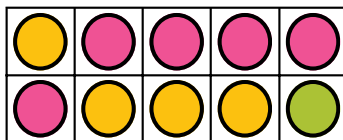
$$\text{Yellow} : \text{Green} =$$



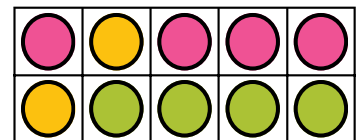
$$\text{Pink} : \text{Green} =$$



$$\text{Pink} : \text{Yellow} =$$



$$\text{Pink} : \text{Green} =$$



$$\text{Green} : \text{Yellow} =$$

Name: _____

Grade: _____

Score: _____


Worksheet #4 (Answers)



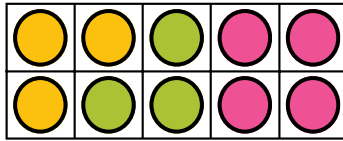
Understanding Ratio

Learning goal: Students will understand ratio with visuals and can represent the concept visually.

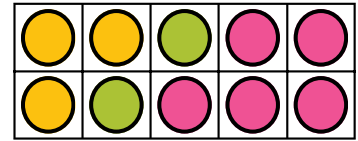
Instructions: Write the ratio for the given colored counters.



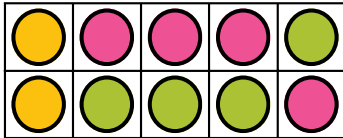
$$\text{Pink} : \text{Green} = 5:3$$



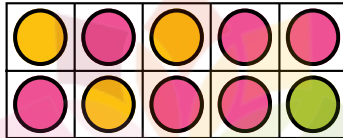
$$\text{Pink} : \text{Green} = 4:3$$



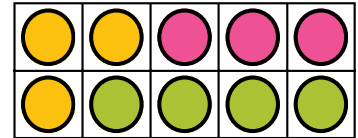
$$\text{Pink} : \text{Green} = 5:2$$



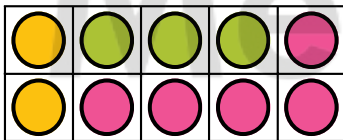
$$\text{Pink} : \text{Green} = 4:4$$




$$\text{Yellow} : \text{Green} = 3:1$$



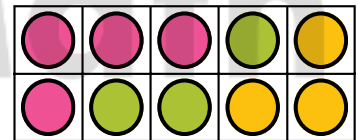
$$\text{Green} : \text{Pink} = 4:3$$



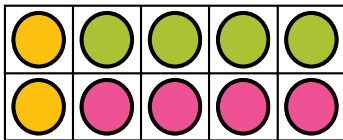
$$\text{Green} : \text{Pink} = 3:5$$



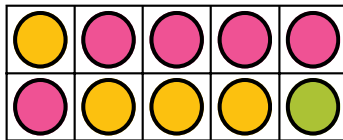
$$\text{Yellow} : \text{Green} = 3:2$$



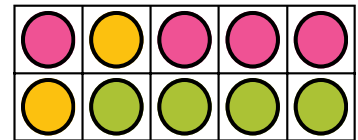
$$\text{Pink} : \text{Green} = 4:3$$



$$\text{Pink} : \text{Yellow} = 4:2$$



$$\text{Pink} : \text{Green} = 5:1$$



$$\text{Green} : \text{Yellow} = 4:2$$