

Name: _____

Grade: _____

Score: _____

Worksheet #4



Number decomposition

Learning objective: Understanding the place values for 2-digit numbers and expanding them.

Instructions: Partition these numbers into tens and ones place value.

72

tens	ones
70	2



27

tens	ones




83

tens	ones




95

tens	ones



31

tens	ones



Name: _____

Grade: _____

Score: _____

Worksheet #4(Answers)



Number decomposition

Learning objective: Understanding the place values for 2-digit numbers and expanding them.

Instructions: Partition these numbers into tens and ones place value.

72

tens	ones
70	2



27

tens	ones
20	7




83

tens	ones
80	3



95

tens	ones
90	5



31

tens	ones
30	1

