



# TIME

## Worksheet 4



**MISTAKES ARE PROOF THAT YOU'RE TRYING."**

1 2 3 4



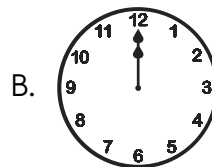
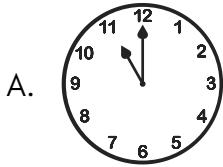
1. Which activity will take longer time?

- A. Baking a cake      B. Eating your lunch      C. Brushing your teeth      D. Drinking water
- 

2. Neha took an afternoon nap at 4 o' clock. She slept for 2 hours. At what time did she wake up?

- A. 7 o' clock      B. 2 o' clock      C. 5 o' clock      D. 6 o' clock
- 

3. Select the correct clock face that shows an ideal dinner time.



4. The sun is just above your head. What time of the day is it?

- A. Morning      B. Noon      C. Evening      D. Night
- 

5. If the minute hand of a clock is at 12 and the hour hand is at 6, then the time will be\_\_\_\_\_

- A. 12 o' clock      B. 3 o' clock      C. 6 o' clock      D. 1 o' clock
- 


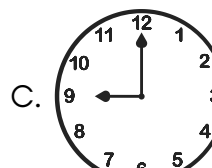


6. Ram's birthday is in February. On which of the following dates his birthday cannot fall?

- A. 27th      B. 29th      C. 28th      D. 30th
- 

7. At what hours both the hands of a clock are exactly one above the other?

- A. 6 O' clock      B. 9 O' clock      C. 12 O' clock      D. 3 O' clock
- 

8. Rita goes to bed at half past 9 every day. Which clock shows the correct time that she goes to bed?



9. Which is the correct sequence of doing the activities given below?

- A. Playing → Going to school → Bathing → Brushing
  - B. Bathing → Brushing → Going to school → Sleeping
  - C. Bathing → Going to school → Sleeping → Playing
  - D. Brushing → Bathing → Breakfast → Going to school
- 

10. Which activity will require less time, if the flow of water is same in each case?

- A. Filling a bucket with water.
  - B. Filling a tank with water.
  - C. Filling a glass with water.
  - D. Filling a jug with water
- 





TM

**MeandMath**  
BELIEVE YOURSELF

## **BOOST YOUR MATH PERFORMANCE WITH MeandMath**



Our Premium Batches are 1:1, 1:2, 1:3 and 1:6 & another batch is 1: many batches.



Clear Doubts, Master Concepts, Excel with Confidence.



Learn on Your Schedule with Our Class Recordings.



Stay Ahead, Stay Sharp: Conquer Daily Homework Hassle-Free



Level Up Weekly: Ace Assessments with Confidence and Ease

### **Join Our Live Classes**

**Preparing for the  
Math Olympiad?**

Book Now >

### **Register to MnM Olympiad**

**Want to test your  
International Math  
Rank?**

Register Here >

Visit [meandmath.com](https://meandmath.com) to learn more about us.

# A Roadmap to Brilliance

Our curriculum paves the way.

○ **Core**      ○ **Advanced**      ○ **Scholar**

Visit [meandmath.com](https://meandmath.com) for further details on Curriculum.

*“There are many  
paths to success in  
Math. We help all  
students discover  
theirs.”*

**Are you stuck, not sure how  
to solve math problem?**

**Want to Super Charge your  
Math skills with our World Class  
practice content!**

**Join our Homework  
Help Group!**

[Join Now](#)



**Subscribe today to  
get a resource to  
unlock the World of  
Wisdom!**

[Subscribe Here](#)



Visit [meandmath.com](https://meandmath.com) to learn more about us.

# Answer key

1. A
2. D
3. C
4. B
5. C
6. D
7. C
8. B
9. D
10. C