



Data handling





Worksheet 1



MISTAKES ARE PROOF THAT YOU'RE TRYING."

1 2 3 4

(Questions 1-4) Look at the picture and answer the following. Each picture stands for 3.

Tree		Leaf	
Flower		Fruit	

1. How many trees are shown in the graph?

- A. 20 B. 6 C. 18 D. 16

2. How many fruits and flowers are there altogether?

- A. 46 B. 56 C. 36 D. 26





3. Which picture shows 15 objects in the given figure?

- A. Tree B. Flower C. Fruit D. Leaf

4. How many flowers are there?

- A. 20 B. 10 C. 15 D. 9

(Questions 5-9) Read the following picture carefully and answer the following.

Red	
Yellow	
Green	
Pink	

1 Coin = 4 coins

5. How many pink coins are there?

- A. 34 B. 24 C. 44 D. 14

6. How many blue coins are there more than Red coins?

- A. 1 B. 4 C. 8 D. 6

7. How many total coins are mentioned in the picture?

- A. 22 B. 18 C. 72 D. 42

8. How many Green and pink coins are there altogether?

A. 34

B. 44

C. 54

D. 64

9. Which colour is the least?






A. Green

B. Pink

C. Blue

D. Red

10. Neha recorded the number of cookies sold over five days. Look at the given picture and answer the question.

Day	Number of cookies
Monday	
Tuesday	
Wednesday	
Thursday	
Friday	

1 cookie = 5 cookies

On Which day she sells 40 cookies?

A. Monday

B. Tuesday

C. Thursday

D. Friday

MeandMath

BELIEVE YOURSELF



MeandMath
BELIEVE YOURSELF

BOOST YOUR MATH PERFORMANCE WITH MeandMath



Our Premium Batches are 1:1, 1:2, 1:3 and 1:6 & another batch is 1: many batches.



Clear Doubts, Master Concepts, Excel with Confidence.



Learn on Your Schedule with Our Class Recordings.



Stay Ahead, Stay Sharp: Conquer Daily Homework Hassle-Free



Level Up Weekly: Ace Assessments with Confidence and Ease

Join Our Live Classes

**Preparing for the
Math Olympiad?**

Book Now >

Register to MnM Olympiad

**Want to test your
International Math
Rank?**

Register Here >

Visit meandmath.com to learn more about us.

A Roadmap to Brilliance

Our curriculum paves the way.

○ **Core** ○ **Advanced** ○ **Scholar**

Visit meandmath.com for further details on Curriculum.

*“There are many
paths to success in
Math. We help all
students discover
theirs.”*

**Are you stuck, not sure how
to solve math problem?**

**Want to Super Charge your
Math skills with our World Class
practice content!**

**Join our Homework
Help Group!**

[Join Now](#)



**Subscribe today to
get a resource to
unlock the World of
Wisdom!**

[Subscribe Here](#)



Visit meandmath.com to learn more about us.

Answer key

1. C
2. C
3. D
4. D
5. B
6. B
7. C
8. B
9. D
10. D