



Data handling

Worksheet 1



MISTAKES ARE PROOF THAT YOU'RE TRYING."

1 2 3 4

(Questions 1-5) Read the picture and answer the following.

Daily Newspaper Sale				
Monday	News	News		
Tuesday	News	News	News	News
Wednesday	News	News		
Thursday	X	No sale		
Friday	News			

1 news = 10 newspapers

1. What is the total number of newspaper sold on Monday?

- A. 10 B. 30 C. 40 D. 20

2. On which day only 10 newspapers were sold?

- A. Friday B. Thursday C. Tuesday D. None

3. How many newspaper were sold on Tuesday?

- A. 20 B. 30 C. 40 D. 25





4. On which day there is no sale?

- A. Monday B. Thursday C. Tuesday D. Friday

5. How many newspapers were sold on Wednesday and Thursday altogether?

- A. 30 B. 40 C. 20 D. 10

(Questions 6-8) Look at the picture given below and answer the following.

Dog	
Cat	
Fish	
Bunny	

6. How many dogs are there?

- A. 10 B. 20 C. 4 D. 2

7. How many pets are there altogether?

A. 20

B. 10

C. 30

D. 40

8. Which animal was liked the most?






A. Dog

B. Fish

C. Bunny

D. Cat

(Questions 9-10) Neha recorded the number of cookies sold over five days. Look at the given picture and answer the following.

Day	Number of cookies
Monday	
Tuesday	
Wednesday	
Thursday	
Friday	

1 cookie = 5 cookies

9. How many cookies did she sell on Thursday?

A. 10

B. 4

C. 20

D. 30

10. How many cookies did she sell on Monday?

A. 15

B. 25

C. 35

D. 45



MeandMath
BELIEVE YOURSELF

BOOST YOUR MATH PERFORMANCE WITH MeandMath



Our Premium Batches are 1:1, 1:2, 1:3 and 1:6 & another batch is 1: many batches.



Clear Doubts, Master Concepts, Excel with Confidence.



Learn on Your Schedule with Our Class Recordings.



Stay Ahead, Stay Sharp: Conquer Daily Homework Hassle-Free



Level Up Weekly: Ace Assessments with Confidence and Ease

Join Our Live Classes

**Preparing for the
Math Olympiad?**

Book Now >

Register to MnM Olympiad

**Want to test your
International Math
Rank?**

Register Here >

Visit meandmath.com to learn more about us.

A Roadmap to Brilliance

Our curriculum paves the way.

○ **Core** ○ **Advanced** ○ **Scholar**

Visit meandmath.com for further details on Curriculum.

*“There are many
paths to success in
Math. We help all
students discover
theirs.”*

**Are you stuck, not sure how
to solve math problem?**

**Want to Super Charge your
Math skills with our World Class
practice content!**

**Join our Homework
Help Group!**

[Join Now](#)



**Subscribe today to
get a resource to
unlock the World of
Wisdom!**

[Subscribe Here](#)



Visit meandmath.com to learn more about us.

Answer key

1. D
2. A
3. C
4. B
5. C
6. D
7. B
8. B
9. C
10. A