



Data handling

Worksheet 2



MISTAKES ARE PROOF THAT YOU'RE TRYING."

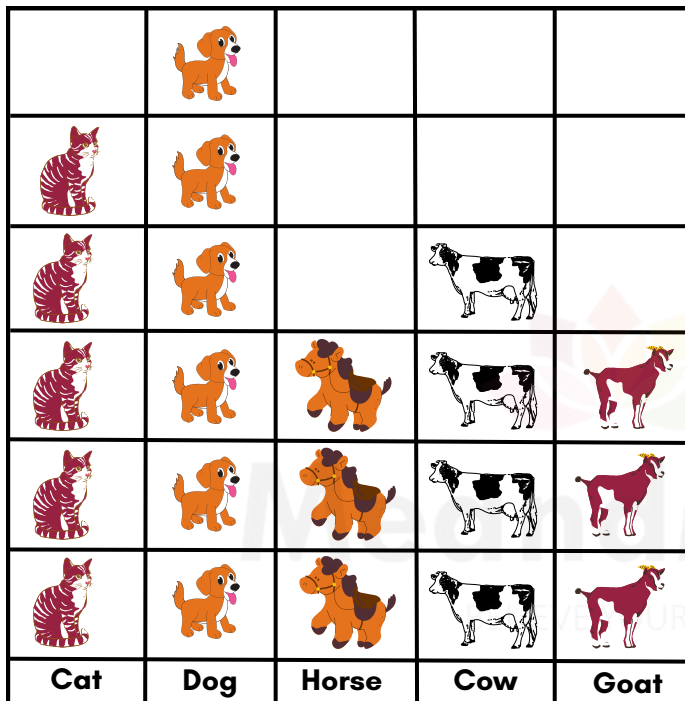
1 2 3 4

1. The box is correctly described as _____



- A. bags and books are equal in numbers. B. books are less in numbers than bags.
C. bags and pencils are equal in numbers. D. there are 9 objects.

(Questions 2-4) According to the graph, answer the following:



2. What is the total number of animals in the graph ?

- A. 22 B. 24 C. 18 D. 21




















3. How many more cats are there than the cows?

- A. 1 B. 2 C. 3 D. 4

4. _____ animals are same in numbers.

- A. Cat and dog B. Dog and horse C. Horse and goat D. Cow and goat

(Questions 5-6) Different types of items are sold by a shopkeeper in a day. Study the picture graph and answer the following.

				
				
				
				
				
Car	Ball	Racket	Ring	Pen


























5. How many more cars are sold than pens?

- A. 5 B. 3 C. 2 D. 1

6. What is the total number of items sold?

- A. 15 B. 19 C. 17 D. 20

(Questions 7-10) Different types of vegetables grown by a farmer are shown below. Study the picture graph and answer the following.

Tomato	   
Capsicum	  
Carrot	     
Mushroom	    
Potato	      

7. _____ types of vegetables are grown by the farmer.

- A. 7 B. 5 C. 4 D. 6

8. Name the vegetable which is least in number.

- A. Mushroom B. Carrot C. Capsicum D. Tomato

9. Find the total number of vegetables grown.

- A. 15 B. 20 C. 25 D. 30

10. Name the vegetable which is most in number.

A. Mushroom

B. Carrot

C. Potato

D. Tomato



MeandMath

BELIEVE YOURSELF



MeandMath
BELIEVE YOURSELF

BOOST YOUR MATH PERFORMANCE WITH MeandMath



Our Premium Batches are 1:1, 1:2, 1:3 and 1:6 & another batch is 1: many batches.



Clear Doubts, Master Concepts, Excel with Confidence.



Learn on Your Schedule with Our Class Recordings.



Stay Ahead, Stay Sharp: Conquer Daily Homework Hassle-Free



Level Up Weekly: Ace Assessments with Confidence and Ease

Join Our Live Classes

**Preparing for the
Math Olympiad?**

Book Now >

Register to MnM Olympiad

**Want to test your
International Math
Rank?**

Register Here >

Visit meandmath.com to learn more about us.

A Roadmap to Brilliance

Our curriculum paves the way.

○ **Core** ○ **Advanced** ○ **Scholar**

Visit meandmath.com for further details on Curriculum.

*“There are many
paths to success in
Math. We help all
students discover
theirs.”*

**Are you stuck, not sure how
to solve math problem?**

**Want to Super Charge your
Math skills with our World Class
practice content!**

**Join our Homework
Help Group!**

[Join Now](#)



**Subscribe today to
get a resource to
unlock the World of
Wisdom!**

[Subscribe Here](#)



Visit meandmath.com to learn more about us.

Answer key

1. C
2. D
3. A
4. C
5. C
6. B
7. B
8. C
9. C
10. C