



Data handling






Worksheet 1



MISTAKES ARE PROOF THAT YOU'RE TRYING."

1 2 3 4

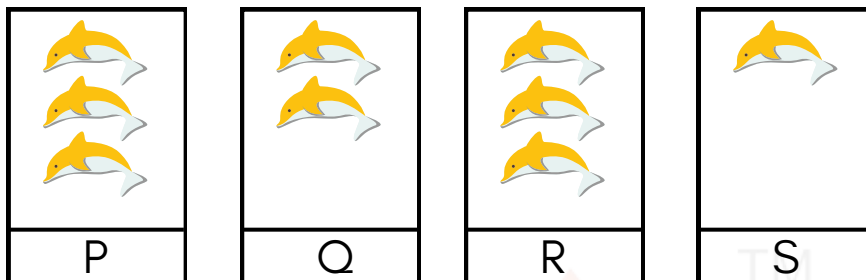
1. The children shown stand in a line starting with the youngest first.

Raju	Anne	Sam	Kuhu	Rani
				
6 years	4 years	3 years	5 years	7 years

Who should stand in the fourth place?

- A. Tanya B. Raju C. Rani D. Anne

2. Which of the 2 sets given show the same number of dolphins?



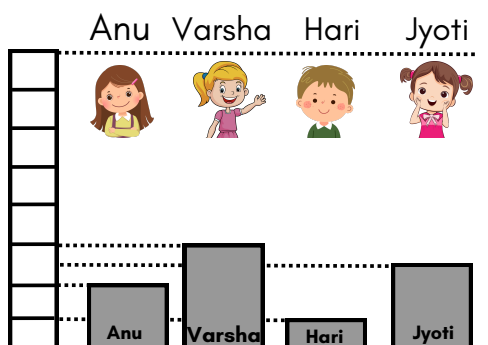
- A. P and Q B. Q and P C. Q and S D. P and R

3. Things are paired by taking the first object from I and the second one from II.
Which one shows the correct pair?




- A.  B.  C.  D. 

4. The students are standing on their respective blocks. Who is the tallest?



- A. Anu B. Varsha C. Hari D. Jyoti

5. How many more motorcycles than cars are there?



A. 5

B. 6

C. 11

D. 16

6. What will come in place of the question mark?





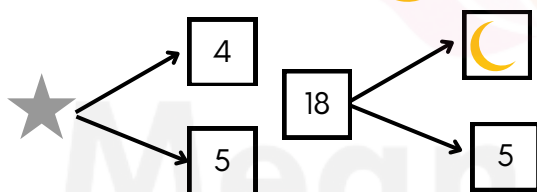
A. 2

B. 3

C. 4

D. 5

7. What is the sum of  and  ?




A. 13

B. 9

C. 10

D. 22

8. Look at the picture below.



Which pair of number sentences could describe these pictures ?


A. $6 + 3 = 9$ and $3 + 6 = 9$

B. $3 + 6 = 9$ and $3 - 6 = 3$

C. $6 + 3 = 9$ and $6 - 3 = 3$

D. $3 - 6 = 3$ and $3 + 6 = 9$

9. Which option is the least in count ?



A. 😊

B. 😞

C. 😍

D. 😄

10. How many stars should be drawn in box B, so that the total stars in the boxes A and B become 15 ?

$$\begin{array}{|c|} \hline \star \star \star \star \\ \hline \star \star \star \star \\ \hline \end{array} + \begin{array}{|c|} \hline \\ \hline \end{array} = \begin{array}{|c|} \hline 15 \\ \hline \end{array}$$

A **B**

- A. $\star \star \star \star \star \star \star \star$
- B. $\star \star \star \star \star$
- C. $\star \star \star \star \star \star \star$
- D. $\star \star \star \star$



TM

MeandMath

BELIEVE YOURSELF



MeandMath
BELIEVE YOURSELF

BOOST YOUR MATH PERFORMANCE WITH MeandMath



Our Premium Batches are 1:1, 1:2, 1:3 and 1:6 & another batch is 1: many batches.



Clear Doubts, Master Concepts, Excel with Confidence.



Learn on Your Schedule with Our Class Recordings.



Stay Ahead, Stay Sharp: Conquer Daily Homework Hassle-Free



Level Up Weekly: Ace Assessments with Confidence and Ease

Join Our Live Classes

**Preparing for the
Math Olympiad?**

Book Now >

Register to MnM Olympiad

**Want to test your
International Math
Rank?**

Register Here >

Visit meandmath.com to learn more about us.

A Roadmap to Brilliance

Our curriculum paves the way.

○ **Core** ○ **Advanced** ○ **Scholar**

Visit meandmath.com for further details on Curriculum.

*“There are many
paths to success in
Math. We help all
students discover
theirs.”*

**Are you stuck, not sure how
to solve math problem?**

**Want to Super Charge your
Math skills with our World Class
practice content!**

**Join our Homework
Help Group!**

[Join Now](#)



**Subscribe today to
get a resource to
unlock the World of
Wisdom!**

[Subscribe Here](#)



Visit meandmath.com to learn more about us.

Answer key

1. B
2. D
3. A
4. B
5. B
6. C
7. D
8. A
9. C
10. A