



Money

Worksheet 3



MISTAKES ARE PROOF THAT YOU'RE TRYING."

1 2 3 4

1. Ria had



. If the cost of an eraser is ₹ 5, then how many erasers can she buy?

A. 3

B. 5

C. 10

D. 6

2. Which of the following costs the most?



3. Study the given picture carefully and match the following.



Column-A

P. Total cost of a guitar and a toy car is _____

Q. Cost of a ball is _____ more than the cost of a balloon.

R. Cost of a toy cat is _____ less than the cost of a toy car.

Column-A

1. ₹ 22

2. ₹ 97

3. ₹ 5


A. (P) → (2), (Q) → (1), (R) → (3)

B. (P) → (3), (Q) → (2), (R) → (1)

C. (P) → (2), (Q) → (3), (R) → (1)

D. (P) → (1), (Q) → (2), (R) → (3)

4. Pooja bought the given tennis ball. She gave ₹ 50 to the shopkeeper. How much amount of money did she get back?




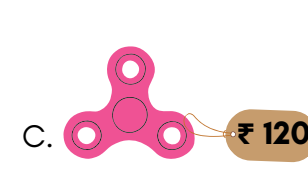
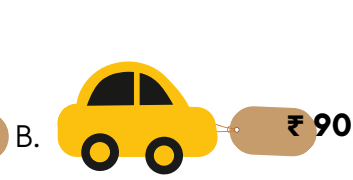

A. ₹ 12

B. ₹ 10



C. ₹ 15

D. ₹ 18

5. Mona's father has given her ₹ 100 as a birthday gift. Which of the following toys can she buy?



6. Which of the following amount is more than ₹ 60?

- A. 
- B. 
- C. 
- D. 

7. Rakhi has ₹ 320. Which of the following items can she buy?



- A. 6 packets of chips, 2 juice packs, 1 notepad
- B. 5 juice packs, 3 crayon boxes, 4 notepads
- C. 3 packets of chips, 4 juice packs, 5 notepads
- D. 4 notepads, 3 crayon boxes, 5 packets of chips

8. Cost of  is ₹ 6. Cost of  is ₹ 5 more than cost of . Find the total cost of both the items.

- A. ₹ 16 B. ₹ 17 C. ₹ 11 D. ₹ 8

9. Niharika wants to buy the given items. The total amount of money she needs is _____



- A. ₹ 50 B. ₹ 75 C. ₹ 95 D. ₹ 85

10. Which of the following options shows the least amount of money?

- A. 
- B. 
- C. 
- D. 



MeandMath
BELIEVE YOURSELF

BOOST YOUR MATH PERFORMANCE WITH MeandMath



Our Premium Batches are 1:1, 1:2, 1:3 and 1:6 & another batch is 1: many batches.



Clear Doubts, Master Concepts, Excel with Confidence.



Learn on Your Schedule with Our Class Recordings.



Stay Ahead, Stay Sharp: Conquer Daily Homework Hassle-Free



Level Up Weekly: Ace Assessments with Confidence and Ease

Join Our Live Classes

**Preparing for the
Math Olympiad?**

Book Now >

Register to MnM Olympiad

**Want to test your
International Math
Rank?**

Register Here >

Visit meandmath.com to learn more about us.

A Roadmap to Brilliance

Our curriculum paves the way.

○ **Core** ○ **Advanced** ○ **Scholar**

Visit meandmath.com for further details on Curriculum.

*“There are many
paths to success in
Math. We help all
students discover
theirs.”*

**Are you stuck, not sure how
to solve math problem?**

**Want to Super Charge your
Math skills with our World Class
practice content!**

**Join our Homework
Help Group!**

[Join Now](#)



**Subscribe today to
get a resource to
unlock the World of
Wisdom!**

[Subscribe Here](#)



Visit meandmath.com to learn more about us.

Answer key

1. A
2. D
3. C
4. A
5. B
6. D
7. A
8. B
9. C
10. C