



Money



Worksheet 1







MISTAKES ARE PROOF THAT YOU'RE TRYING."



1 2 3 4

1. Select the CORRECT match.



A.  > 



B.  = 



C.  < 



D.  = 

2. Manya has ₹ 90. Which of the following things can she buy if she spends all her money?


A.  ₹ 40 +  ₹ 20


B.  ₹ 50 +  ₹ 20


C.  ₹ 70 +  ₹ 20


D.  ₹ 60 +  ₹ 20


3. Which of the following is costlier than the ice-cream cone?

A.  ₹ 45

B.  ₹ 60

C.  ₹ 25

D.  ₹ 75

 ₹ 65

4. Which of the following items can be bought from the given amount of money?

A.  ₹ 100

B.  ₹ 120

C.  ₹ 85

D.  ₹ 105


5. Latika's mother gave her a hundred rupee note. How many rupees are left with her, after she bought a burger and a chocolate?


 ₹ 25


 ₹ 25

A. Fifty B. Twenty five C. Ten D. Twenty

6. Sahil has ₹ 50. Which of the following items can he buy, if he spends all his money?

 ₹ 30


 ₹ 10

 ₹ 5

A. 1 book and 3 staplers B. 1 book and 2 pens

C. 2 staplers and 4 pens D. 1 book and 2 staplers

7. Select the CORRECT option.



- A. Nishit has the most money. B. Nitish has more money than Nishit.
C. Nishi has more money than Nishit. D. Nitish has the least money.

8. Which of the following options has same cost as the amount shown here?



- A.  ₹ 95 B.  ₹ 85 C.  ₹ 75 D.  ₹ 25

9. Kanika has ₹ 70 with her. She buys the handbag shown here. How much money is left with her?



- A. ₹ 35 B. ₹ 40 C. ₹ 50 D. ₹ 45

10. Diksha bought the following gift boxes. What is the total amount paid by her?



- A. ₹ 76 B. ₹ 69 C. ₹ 89 D. ₹ 79
-



TM

MeandMath
BELIEVE YOURSELF

BOOST YOUR MATH PERFORMANCE WITH MeandMath



Our Premium Batches are 1:1, 1:2, 1:3 and 1:6 & another batch is 1: many batches.



Clear Doubts, Master Concepts, Excel with Confidence.



Learn on Your Schedule with Our Class Recordings.



Stay Ahead, Stay Sharp: Conquer Daily Homework Hassle-Free



Level Up Weekly: Ace Assessments with Confidence and Ease

Join Our Live Classes

**Preparing for the
Math Olympiad?**

Book Now >

Register to MnM Olympiad

**Want to test your
International Math
Rank?**

Register Here >

Visit meandmath.com to learn more about us.

A Roadmap to Brilliance

Our curriculum paves the way.

○ **Core** ○ **Advanced** ○ **Scholar**

Visit meandmath.com for further details on Curriculum.

*“There are many
paths to success in
Math. We help all
students discover
theirs.”*

**Are you stuck, not sure how
to solve math problem?**

**Want to Super Charge your
Math skills with our World Class
practice content!**

**Join our Homework
Help Group!**

[Join Now](#)



**Subscribe today to
get a resource to
unlock the World of
Wisdom!**

[Subscribe Here](#)



Visit meandmath.com to learn more about us.

Answer key

1. B
2. C
3. D
4. C
5. A
6. D
7. A
8. C
9. B
10. D