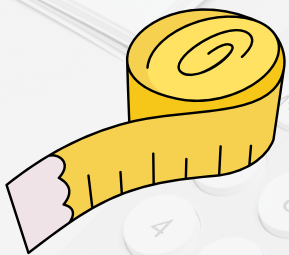




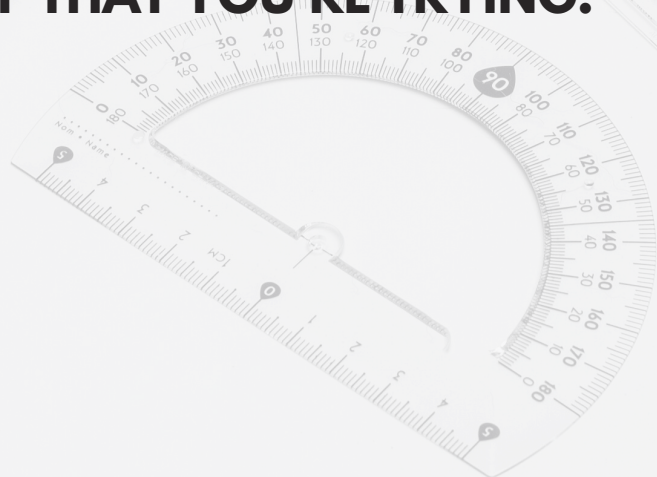
Measurement

Worksheet 5



MISTAKES ARE PROOF THAT YOU'RE TRYING."

1 2 3 4



1. Rohan bought  3 kg and  2 kg. He has _____ kg weight.


A. 3

B. 4

C. 1

D. 5

2. Nidhi has two coloured ribbons as shown. The total length of both the ribbons is _____



A. 15

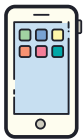
B. 16

C. 17

D. 18

3. _____ is the shortest.

A.



B.



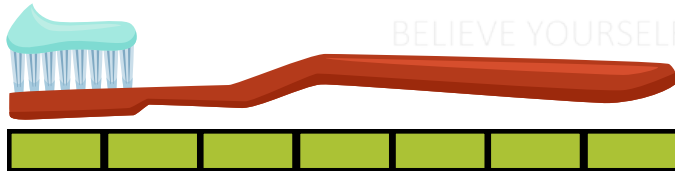
C.



D.



4. If 1  means 1 unit, then the toothbrush is _____ units long.




A. 17

B. 7

C. 12

D. 8

5. The given weighing scale shows _____.



A. Puppy is heavier than bat

B. Puppy is lighter than bat

C. Both have the same weight

D. Can't be determined

6. Soham has the given bucket of paint. Quantity of paint in 3 such buckets is _____ liters.



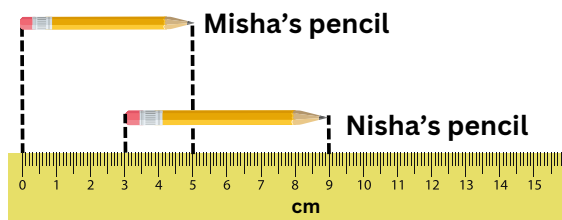
A. 30

B. 45

C. 15

D. 40

7. Nisha's pencil is _____ longer than Misha's pencil.




A. 4 cm

B. 3 cm

C. 8 cm

D. 1 cm

8. Minimum number of blocks a mouse run to reach the cake, if it moves only in horizontal and vertical direction, is _____.



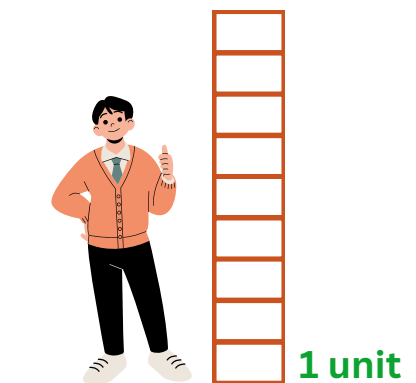
A. 9

B. 8

C. 10

D. 7

9. The man is _____ units tall.




A. 6 units

B. 7 units

C. 5 units

D. 8 units

10. Total length of Komal's and Beena's pencil is _____.



A. 21 cm

B. 31 cm

C. 17 cm

D. 20 cm



TM

MeandMath

BELIEVE YOURSELF



MeandMath

BELIEVE YOURSELF

BOOST YOUR MATH PERFORMANCE WITH MeandMath



Our Premium Batches are 1:1, 1:2, 1:3 and 1:6 & another batch is 1: many batches.



Clear Doubts, Master Concepts, Excel with Confidence.



Learn on Your Schedule with Our Class Recordings.



Stay Ahead, Stay Sharp: Conquer Daily Homework Hassle-Free



Level Up Weekly: Ace Assessments with Confidence and Ease

Join Our Live Classes

**Preparing for the
Math Olympiad?**

Book Now >

Register to MnM Olympiad

**Want to test your
International Math
Rank?**

Register Here >

Visit meandmath.com to learn more about us.



MeandMath
BELIEVE YOURSELF

A Roadmap to Brilliance

Our curriculum paves the way.

○ **Core** ○ **Advanced** ○ **Scholar**

Visit meandmath.com for further details on Curriculum.

“There are many paths to success in Math. We help all students discover theirs.”

Are you stuck, not sure how to solve math problem?

Want to Super Charge your Math skills with our World Class practice content!

Join our Homework Help Group!

[Join Now](#)



Subscribe today to get a resource to unlock the World of Wisdom!

[Subscribe Here](#)



Visit meandmath.com to learn more about us.

Answer key

- 1. D
- 2. D
- 3. C
- 4. B
- 5. A
- 6. B
- 7. d
- 8. B
- 9. B
- 10. D

