



GEOMETRY


Worksheet 5



Believe you can and you are halfway there.

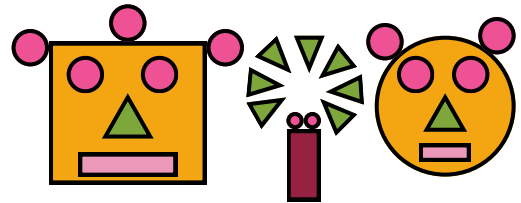
1. How many circles and triangles are there in the cloud?.

- A. 4
- B. 7
- C. 10
- D. 8



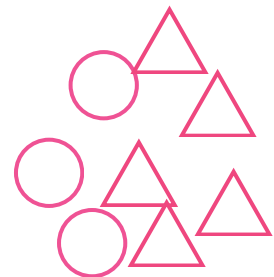
2. How many circles are there in the given figure?

- A. 11
- B. 12
- C. 10
- D. 8



3. There are _____ less circles than triangles in the given figure.

- A. 1
- B. 3
- C. 2
- D. 4



4. Which of the following objects can slide but not roll?

A.



B.



C.




D.




5. There are _____ triangles in the given figure.

- A. 2
- B. 5
- C. 6
- D. 7



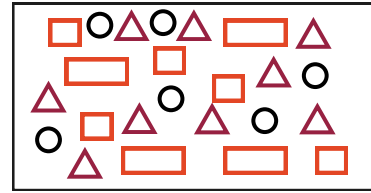
6. How many circles are there in the given figure?

- A. 3
- B. 4
- C. 5
- D. 6

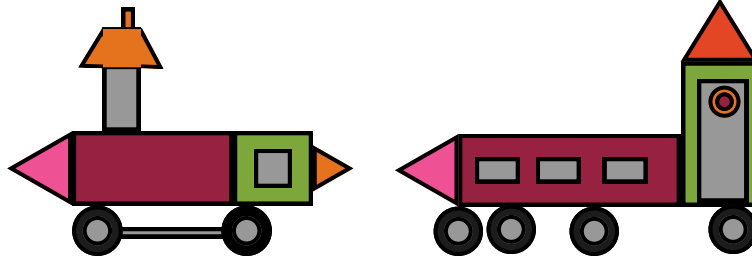


7. There are _____ more circles than rectangles in the figure.

- A. 3
- B. 4
- C. 2
- D. 6



8. Which shape is maximum in the figure?



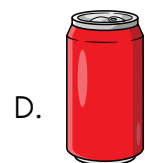
- A. Rectangle
- B. Circle
- C. Triangle
- D. Square

9. Shapes _____ and _____ will form a circle.



- A. P and Q
- B. P and R
- C. Q and S
- D. P and S

10. Which of the following objects can both roll and slide?





MeandMath
BELIEVE YOURSELF

BOOST YOUR MATH PERFORMANCE WITH MeandMath



Our Premium Batches are 1:1, 1:2, 1:3 and 1:6 & another batch is 1: many batches.



Clear Doubts, Master Concepts, Excel with Confidence.



Learn on Your Schedule with Our Class Recordings.



Stay Ahead, Stay Sharp: Conquer Daily Homework Hassle-Free



Level Up Weekly: Ace Assessments with Confidence and Ease

Join Our Live Classes

**Preparing for the
Math Olympiad?**

Book Now >

Register to MnM Olympiad

**Want to test your
International Math
Rank?**

Register Here >

Visit meandmath.com to learn more about us.



MeandMath
BELIEVE YOURSELF

A Roadmap to Brilliance

Our curriculum paves the way.

○ **Core** ○ **Advanced** ○ **Scholar**

Visit meandmath.com for further details on Curriculum.

*“There are many
paths to success in
Math. We help all
students discover
theirs.”*

**Are you stuck, not sure how
to solve math problem?**

**Want to Super Charge your
Math skills with our World Class
practice content!**

**Join our Homework
Help Group!**

[Join Now](#)



**Subscribe today to
get a resource to
unlock the World of
Wisdom!**

[Subscribe Here](#)



Visit meandmath.com to learn more about us.

Answer key

- 1.B
- 2.B
- 3.C
- 4.B
- 5.D
- 6.C
- 7.C
- 8.B
- 9.C
- 10.D

