



GEOMETRY

Worksheet 4




Believe you can and you are halfway there.

1 2 3 4

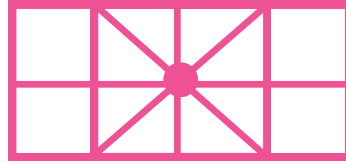
1. There are _____ ovals in the given figure.

- A. 4
- B. 3
- C. 1
- D. 2




2. How many horizontal lines are there in the given figure?

- A. 2
- B. 4
- C. 3
- D. 5



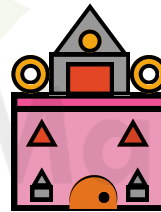
3. There are _____ squares in the adjoining figure.

- A. 0
- B. 9
- C. 2
- D. 8



4. How many triangles are there in the given figure?

- A. 4
- B. 5
- C. 6
- D. 7



5. All my 4 sides are equal, and I have 4 corners. Who am I?

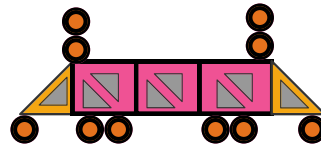
- A. Rectangle
- B. Square
- C. Circle
- D. Triangle

6. Select the odd one out.

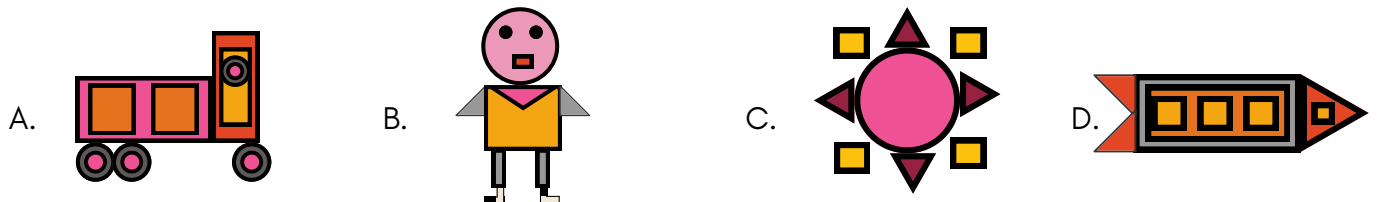


7. There are _____ circles more than triangles in the given figure.

- A. 30
- B. 20
- C. 10
- D. 25




8. Which drawing has the maximum circles?




9. Count the number of rectangles in the given figure.

- A. 12
- B. 11
- C. 8
- D. 10



10. Which shape is maximum in the given figure?

- A. Rhombus
- B. Circle
- C. Triangle
- D. Rectangle





TM

MeandMath

BELIEVE YOURSELF

BOOST YOUR MATH PERFORMANCE WITH MeandMath



Our Premium Batches are 1:1, 1:2, 1:3 and 1:6 & another batch is 1: many batches.



Clear Doubts, Master Concepts, Excel with Confidence.



Learn on Your Schedule with Our Class Recordings.



Stay Ahead, Stay Sharp: Conquer Daily Homework Hassle-Free



Level Up Weekly: Ace Assessments with Confidence and Ease

Join Our Live Classes

**Preparing for the
Math Olympiad?**

Book Now >

Register to MnM Olympiad

**Want to test your
International Math
Rank?**

Register Here >

Visit meandmath.com to learn more about us.



TM

MeandMath

BELIEVE YOURSELF

A Roadmap to Brilliance

Our curriculum paves the way.

○ **Core** ○ **Advanced** ○ **Scholar**

Visit meandmath.com for further details on Curriculum.

*“There are many
paths to success in
Math. We help all
students discover
theirs.”*

**Are you stuck, not sure how
to solve math problem?**

**Want to Super Charge your
Math skills with our World Class
practice content!**

**Join our Homework
Help Group!**

[Join Now](#)



**Subscribe today to
get a resource to
unlock the World of
Wisdom!**

[Subscribe Here](#)



Visit meandmath.com to learn more about us.

Answer Key

- 1.B
- 2.C
- 3.A
- 4.B
- 5.B
- 6.C
- 7.C
- 8.A
- 9.C
- 10.B



TM

MeandMath

BELIEVE YOURSELF

