




GEOMETRY

Worksheet 3



1. _____ shape is NOT present in the given cloud.


- A. Rectangle
- B. Circle
- C. Triangle
- D. Square



2. Study the given picture carefully and fill in the blanks.


- The number of triangles is P .
- The number of circles is Q more than the number of rectangles.

- | | P | Q |
|----|----------|----------|
| A. | 10 | 13 |
| B. | 9 | 10 |
| C. | 11 | 12 |
| D. | 9 | 9 |



3. Which of the following shapes is not shown in the picture?

- A. Rectangle
- B. Circle
- C. Triangle
- D. Square




4. Which of the following objects can roll but not slide?

- | | | | |
|--|--|---|--|
| A.  | B.  | C.  | D.  |
|--|--|---|--|


5. There are P circles, Q triangles and R squares in the given figure.

- | | P | Q | R |
|----|----------|----------|----------|
| A. | 15 | 18 | 3 |
| B. | 17 | 7 | 2 |
| C. | 15 | 5 | 4 |
| D. | 17 | 5 | 3 |



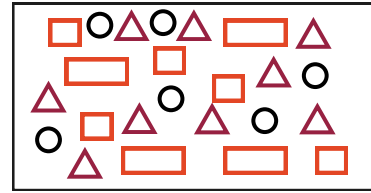
6. Which of the following is NOT present in the given figure?

- A. Triangle
- B. Square
- C. Circle
- D. Rectangle

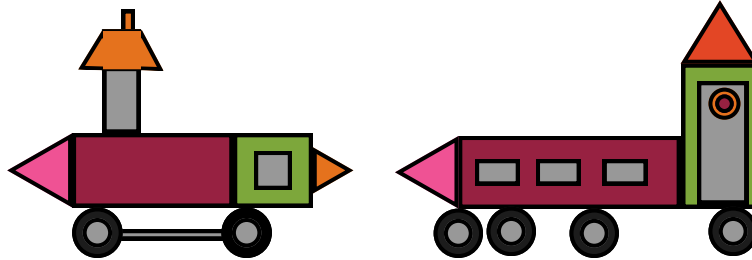


7. There are _____ more triangles than squares in the figure.

- A. 3
- B. 4
- C. 5
- D. 6



8. Study the figure carefully and select the CORRECT option.



- (a) There are _____ circles in the figure.
- (b) There are _____ less squares than triangles in the given figure.

- | (a) | (b) |
|-------|-----|
| A. 14 | 1 |
| B. 15 | 4 |
| C. 12 | 1 |
| D. 14 | 2 |

9. Shapes _____ and _____ will form a rectangle.



- A. P and Q
- B. P and R
- C. Q and R
- D. P and S

10. Which of the following objects can roll but not slide?

- A.
- B.
- C.
- D.



TM

MeandMath
BELIEVE YOURSELF

BOOST YOUR MATH PERFORMANCE WITH MeandMath



Our Premium Batches are 1:1, 1:2, 1:3 and 1:6 & another batch is 1: many batches.



Clear Doubts, Master Concepts, Excel with Confidence.



Learn on Your Schedule with Our Class Recordings.



Stay Ahead, Stay Sharp: Conquer Daily Homework Hassle-Free



Level Up Weekly: Ace Assessments with Confidence and Ease

Join Our Live Classes

**Preparing for the
Math Olympiad?**

Book Now >

Register to MnM Olympiad

**Want to test your
International Math
Rank?**

Register Here >



MeandMath
BELIEVE YOURSELF

A Roadmap to Brilliance

Our curriculum paves the way.

○ **Core** ○ **Advanced** ○ **Scholar**

Visit meandmath.com for further details on Curriculum.

*“There are many
paths to success in
Math. We help all
students discover
theirs.”*

**Are you stuck, not sure how
to solve math problem?**

**Want to Super Charge your
Math skills with our World Class
practice content!**

**Join our Homework
Help Group!**

[Join Now](#)



**Subscribe today to
get a resource to
unlock the World of
Wisdom!**

[Subscribe Here](#)



Visit meandmath.com to learn more about us.

Answer key

- 1.D
- 2.D
- 3.D
- 4.C
- 5.B
- 6.B
- 7.C
- 8.D
- 9.B
- 10.C

