



GEOMETRY

Worksheet 2




Motivate yourself everyday to do better

1 2 3 4

1. Next figure in the given pattern is _____.




- A.  B.  C.  D. 

2. Fill in the blanks.

1. There are ___P___ less rectangles than circles.


2. There are ___Q___ triangles and square altogether.

- A. P-2, Q-14
B. P-0, Q-12
C. P-1, Q-12
D. P-1, Q-13



3. There are _____ yellow triangles and _____ pink circles in the given figures.

- A. 4, 5
B. 5, 6
C. 6, 6
D. 5, 5




4. How many of the following objects will roll but not slide?



- A. 1 B. 4 C. 3 D. 0

5. Name the shape which is coloured green in the given picture.

- A. Circle
B. Triangle
C. Square
D. Rectangle




6. The shape of the photo frame shown in the figure is _____.

- A. Sphere
B. Oval
C. Cylinder
D. Cone



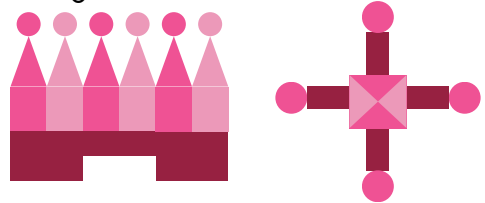
7. _____ is NOT present in the given figure.

- A. Circle
- B. Triangle
- C. Square
- D. Pentagon



8. There are _____ less circles than triangles in the given figure.

- A. 5
- B. 2
- C. 3
- D. 0



9. Select the CORRECT statement about the given figure.


- A. It can only slide.
- C. It can roll as well as slide

- B. It can only roll.
- D. It can neither roll nor slide



10. The number of triangles in the given figure is _____.

- A. 5
- B. 6
- C. 4
- D. 3





TM

MeandMath
BELIEVE YOURSELF

BOOST YOUR MATH PERFORMANCE WITH MeandMath



Our Premium Batches are 1:1, 1:2, 1:3 and 1:6 & another batch is 1: many batches.



Clear Doubts, Master Concepts, Excel with Confidence.



Learn on Your Schedule with Our Class Recordings.



Stay Ahead, Stay Sharp: Conquer Daily Homework Hassle-Free



Level Up Weekly: Ace Assessments with Confidence and Ease

Join Our Live Classes

**Preparing for the
Math Olympiad?**

Book Now >

Register to MnM Olympiad

**Want to test your
International Math
Rank?**

Register Here >

Visit meandmath.com to learn more about us.



MeandMath
BELIEVE YOURSELF

A Roadmap to Brilliance

Our curriculum paves the way.

○ **Core** ○ **Advanced** ○ **Scholar**

Visit meandmath.com for further details on Curriculum.

*“There are many
paths to success in
Math. We help all
students discover
theirs.”*

**Are you stuck, not sure how
to solve math problem?**

**Want to Super Charge your
Math skills with our World Class
practice content!**

**Join our Homework
Help Group!**

[Join Now](#)



**Subscribe today to
get a resource to
unlock the World of
Wisdom!**

[Subscribe Here](#)



Visit meandmath.com to learn more about us.

Answer key

- 1.B
- 2.A
- 3.D
- 4.D
- 5.B
- 6.B
- 7.D
- 8.D
- 9.C
- 10.A

