



GEOMETRY

Worksheet 1




Believe you can and you are halfway there.

1 2 3 4

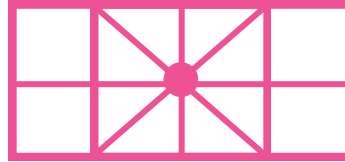
1. There are _____ circles in the given figure.

- A. 14
- B. 10
- C. 11
- D. 12




2. How many vertical lines are there in the given figure?

- A. 2
- B. 4
- C. 3
- D. 5




3. There are _____ more circles than triangles in the adjoining figure.

- A. 0
- B. 3
- C. 2
- D. 1




4. Which shape is NOT present in the given figure?

- A. Rectangle
- B. Square
- C. Triangle
- D. Circle



5. Which shape is used to draw the door of the House?

- A. Rectangle
- B. Square
- C. Circle
- D. Triangle

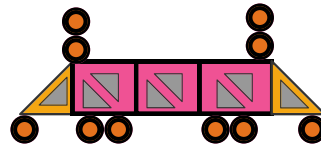


6. Select the odd one out.

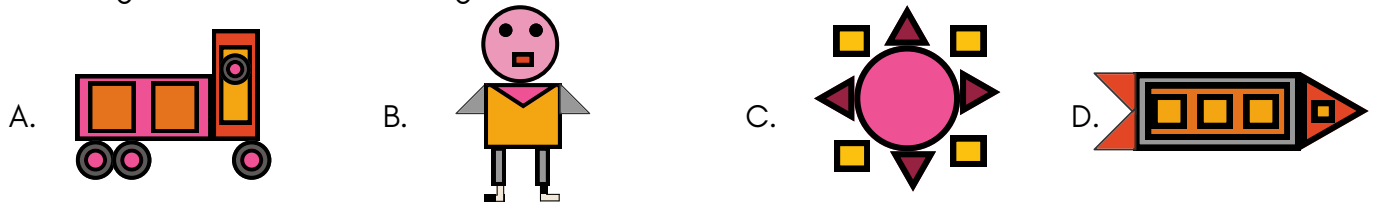
- A.
- B.
- C.
- D.

7. There are _____ circles and triangles altogether in the given figure.

- A. 30
- B. 28
- C. 26
- D. 25




8. There are only 4 squares, 3 triangles and 2 rectangles in Rinki's drawing. Which of the following could be Rinki's drawing?




9. Count the number of triangles in the given figure.

- A. 12
- B. 13
- C. 11
- D. 14



10. Identify the missing shape in the given figure.

- A. Rhombus
- B. Circle
- C. Triangle
- D. Rectangle





MeandMath
BELIEVE YOURSELF

BOOST YOUR MATH PERFORMANCE WITH MeandMath



Our Premium Batches are 1:1, 1:2, 1:3 and 1:6 & another batch is 1: many batches.



Clear Doubts, Master Concepts, Excel with Confidence.



Learn on Your Schedule with Our Class Recordings.



Stay Ahead, Stay Sharp: Conquer Daily Homework Hassle-Free



Level Up Weekly: Ace Assessments with Confidence and Ease

Join Our Live Classes

**Preparing for the
Math Olympiad?**

Book Now >

Register to MnM Olympiad

**Want to test your
International Math
Rank?**

Register Here >

Visit meandmath.com to learn more about us.



TM

MeandMath

BELIEVE YOURSELF

A Roadmap to Brilliance

Our curriculum paves the way.

○ **Core** ○ **Advanced** ○ **Scholar**

Visit meandmath.com for further details on Curriculum.

*“There are many
paths to success in
Math. We help all
students discover
theirs.”*

**Are you stuck, not sure how
to solve math problem?**

**Want to Super Charge your
Math skills with our World Class
practice content!**

**Join our Homework
Help Group!**

[Join Now](#)



**Subscribe today to
get a resource to
unlock the World of
Wisdom!**

[Subscribe Here](#)



Visit meandmath.com to learn more about us.

Answer key

1.D

2.D

3.A

4.B

5.A

6.D

7.A

8.D

9.B

10.A



MeandMath

BELIEVE YOURSELF

