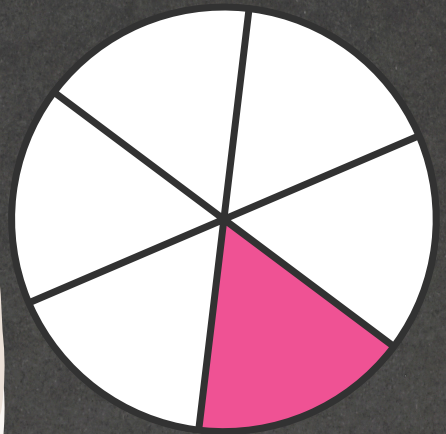




FRACTIONS



Worksheet 3



FAILURE IS THE STEPPING STONE TO SUCCESS.

1. The numerator of the fraction is _____



A. 2

B. 4

C. 3

D. 1

2. This shows _____ of a coconut.



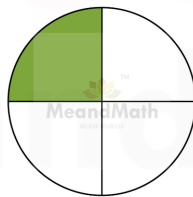
A. $\frac{1}{2}$

B. $\frac{1}{4}$

C. $\frac{1}{3}$

D. 1

3. What fraction of the circle is shaded green?



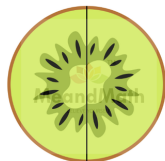
A. 1

B. $\frac{1}{4}$

C. $\frac{1}{3}$

D. $\frac{1}{2}$

4. The fruit is divided into _____ equal parts.



A. 2

B. 4

C. 3

D. 1

5. What fraction of the circle is shaded?



A. $\frac{1}{2}$

B. 1

C. 2

D. $\frac{1}{3}$

6. What fraction of the picture is coloured?



A. 3

B. $\frac{1}{2}$

C. 1

D. $\frac{1}{3}$

7. 1 part out of _____ equal parts is cut.



A. 2

B. 4

C. 3

D. 1

8. A fraction is written using _____ numbers


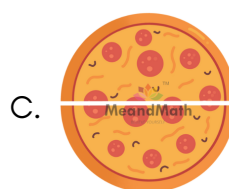

A. 2

B. 1

C. 4

D. 3

9. Which Pizza is divided into $\frac{1}{3}$?



10. How is the fraction written in words?

$$\frac{1}{3}$$

A. Half

B. Quarter

C. One-third

D. One-fourth

BOOST YOUR MATH PERFORMANCE WITH MeandMath



Our Premium Batches are 1:1, 1:2, 1:3 and 1:6 & another batch is 1: many batches.



Clear Doubts, Master Concepts, Excel with Confidence.



Learn on Your Schedule with Our Class Recordings.



Stay Ahead, Stay Sharp: Conquer Daily Homework Hassle-Free



Level Up Weekly: Ace Assessments with Confidence and Ease

Join Our Live Classes

**Preparing for the
Math Olympiad?**

Book Now >

Register to MnM Olympiad

**Want to test your
International Math
Rank?**

Register Here >

A Roadmap to Brilliance

Our curriculum paves the way.

○ **Core** ○ **Advanced** ○ **Scholar**

Visit meandmath.com for further details on Curriculum.

*“There are many
paths to success in
Math. We help all
students discover
theirs.”*

**Are you stuck, not sure how
to solve math problem?**

**Want to Super Charge your
Math skills with our World Class
practice content!**

**Join our Homework
Help Group!**

[Join Now](#)



**Subscribe today to
get a resource to
unlock the World of
Wisdom!**

[Subscribe Here](#)



Visit meandmath.com to learn more about us.

Answer Key

1. D
2. A
3. B
4. A
5. A
6. D
7. C
8. A
9. A
10. C



TM

MeandMath

BELIEVE YOURSELF