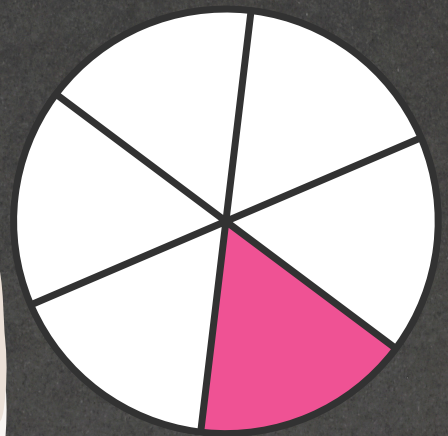




FRACTIONS

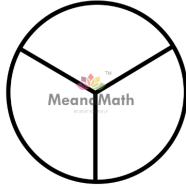


Worksheet 2



DREAM BIG BUT DO NOT BE AFRAID OF FAILURE.

1. The circle is divided into ____ equal parts.




A. 1

B. 3

C. 2

D. 4

2. What fraction of the circle is orange?



A. 1

B. $\frac{3}{4}$

C. $\frac{2}{4}$

D. $\frac{1}{4}$

3. This is a _____ of a lemon.

A. Part

B. Whole



4. The watermelon is divided into _____ equal parts.




A. 5

B. 3

C. 6

D. 4

5. Fraction means dividing an object into _____ parts.



A. small

B. equal

C. unequal

D. large

6. What fraction of a flower is shown?



A. $\frac{1}{4}$

B. $\frac{1}{3}$

C. 1

D. $\frac{1}{2}$

7. This is a _____ star.



A. 5

B. part

C. whole

D. 2

8. How many parts of the picture are colored yellow?




A. 2

B. 4

C. 6

D. 3

9. The pizza shows:



A. $\frac{1}{2}$

B. $\frac{1}{3}$

C. 1

D. $\frac{1}{4}$

10. The denominator of the fraction is _____

$$\frac{1}{2}$$

A. 1

B. 3

C. 2

D. 4

BOOST YOUR MATH PERFORMANCE WITH MeandMath



Our Premium Batches are 1:1, 1:2, 1:3 and 1:6 & another batch is 1: many batches.



Clear Doubts, Master Concepts, Excel with Confidence.



Learn on Your Schedule with Our Class Recordings.



Stay Ahead, Stay Sharp: Conquer Daily Homework Hassle-Free



Level Up Weekly: Ace Assessments with Confidence and Ease

Join Our Live Classes

**Preparing for the
Math Olympiad?**

Book Now >

Register to MnM Olympiad

**Want to test your
International Math
Rank?**

Register Here >

A Roadmap to Brilliance

Our curriculum paves the way.

○ **Core** ○ **Advanced** ○ **Scholar**

Visit meandmath.com for further details on Curriculum.

*“There are many
paths to success in
Math. We help all
students discover
theirs.”*

**Are you stuck, not sure how
to solve math problem?**

**Want to Super Charge your
Math skills with our World Class
practice content!**

**Join our Homework
Help Group!**

[Join Now](#)



**Subscribe today to
get a resource to
unlock the World of
Wisdom!**

[Subscribe Here](#)



Visit meandmath.com to learn more about us.

Answer Key

1. B
2. B
3. A
4. C
5. B
6. D
7. C
8. D
9. A
10. C



TM

MeandMath

BELIEVE YOURSELF

