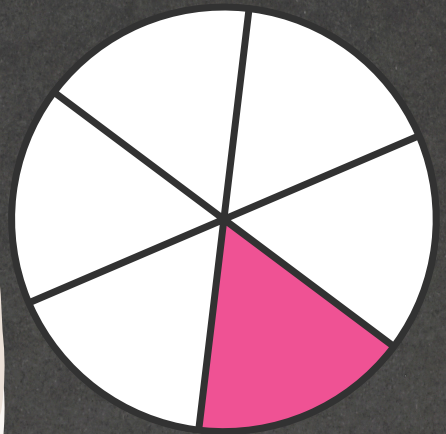




FRACTIONS



Worksheet 1



THE SECRET TO GETTING AHEAD IS GETTING STARTED.

1. What fraction of the glass is full?

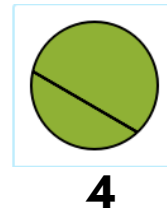
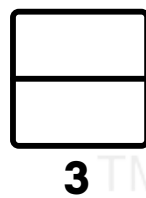


- A. 1 B. $\frac{1}{3}$ C. $\frac{1}{2}$ D. $\frac{1}{4}$
-

2. Fraction is _____ of a whole.

- A. double B. part C. triple D. twice
-

3. Which shapes shows equal parts?



- A. 1,2 B. 1,3 C. 2,3 D. 2,4
-

4. How many parts does this pizza show?



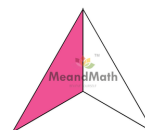
- A. 4 B. 6 C. 8 D. 2
-

5. What does this picture show?



- A. Whole B. Part
-

6. The triangle has _____ out of 3 parts coloured.



- A. 1 B. 3 C. 5 D. 6
-

7. What fraction of the heart is pink?



A. $\frac{1}{4}$

B. 1

C. $\frac{1}{2}$

D. $\frac{1}{3}$

8. The star has 1 out of _____ parts coloured pink.




A. 3

B. 4

C. 5

D. 6

9. The tomato is divided into _____ equal parts.



A. 2

B. 4

C. 3

D. 6

10. What fraction of the triangle is orange?



A. $\frac{3}{4}$

B. $\frac{1}{4}$

C. 1

D. $\frac{2}{4}$

BOOST YOUR MATH PERFORMANCE WITH MeandMath



Our Premium Batches are 1:1, 1:2, 1:3 and 1:6 & another batch is 1: many batches.



Clear Doubts, Master Concepts, Excel with Confidence.



Learn on Your Schedule with Our Class Recordings.



Stay Ahead, Stay Sharp: Conquer Daily Homework Hassle-Free



Level Up Weekly: Ace Assessments with Confidence and Ease

Join Our Live Classes

**Preparing for the
Math Olympiad?**

Book Now >

Register to MnM Olympiad

**Want to test your
International Math
Rank?**

Register Here >

A Roadmap to Brilliance

Our curriculum paves the way.

○ **Core** ○ **Advanced** ○ **Scholar**

Visit meandmath.com for further details on Curriculum.

*“There are many
paths to success in
Math. We help all
students discover
theirs.”*

**Are you stuck, not sure how
to solve math problem?**

**Want to Super Charge your
Math skills with our World Class
practice content!**

**Join our Homework
Help Group!**

[Join Now](#)



**Subscribe today to
get a resource to
unlock the World of
Wisdom!**

[Subscribe Here](#)



Visit meandmath.com to learn more about us.

Answer Key

1. C
2. B
3. B
4. A
5. A
6. A
7. C
8. B
9. B
10. B



MeandMath

BELIEVE YOURSELF

